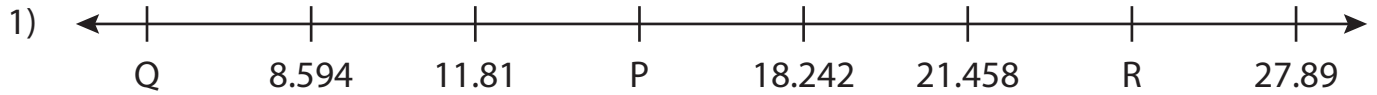


Name : _____

Missing Numbers

Thousandth: T3S4

What numbers do the letters in each number line represent?



P = _____ ; Q = _____ ; R = _____



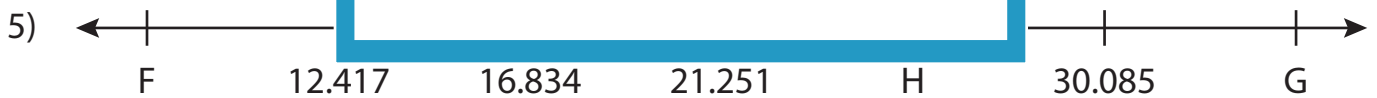
K = _____



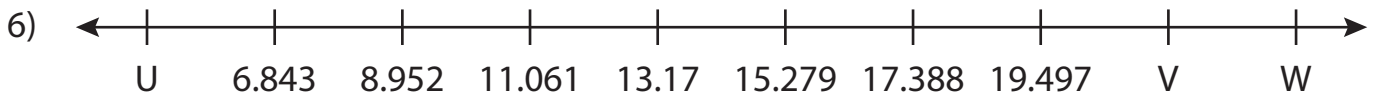
B = _____



X = _____



F = _____ ; G = _____ ; H = _____



U = _____ ; V = _____ ; W = _____

PREVIEW

Gain complete access to the largest collection of worksheets in all subjects!

Members, please log in to download this worksheet.

Not a member? Please sign up to gain complete access.

www.mathworksheets4kids.com


Name : _____

Answer key

Missing Numbers

Thousandth: T3S4

What numbers do the letters in each number line represent?



P = 15.026 ; Q = 5.378 ; R = 24.674



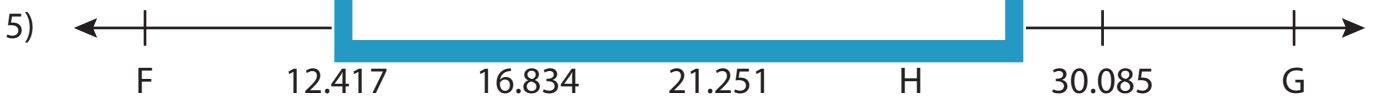
K = .614



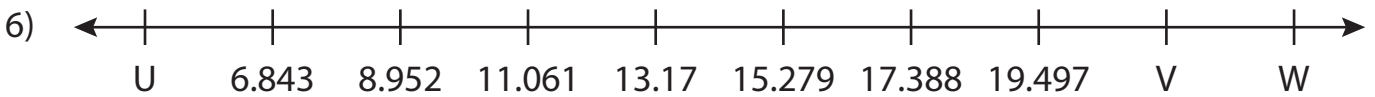
B = .064



X = .469



F = 8 ; G = 34.502 ; H = 25.668



U = 4.734 ; V = 21.606 ; W = 23.715

PREVIEW

Gain complete access to the largest collection of worksheets in all subjects!

Members, please log in to download this worksheet.

Not a member? Please sign up to gain complete access.

www.mathworksheets4kids.com