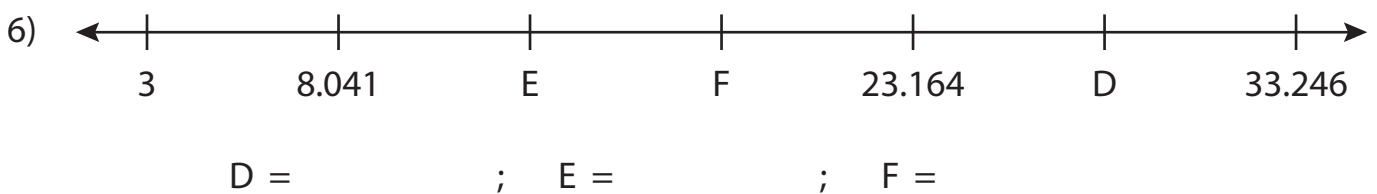
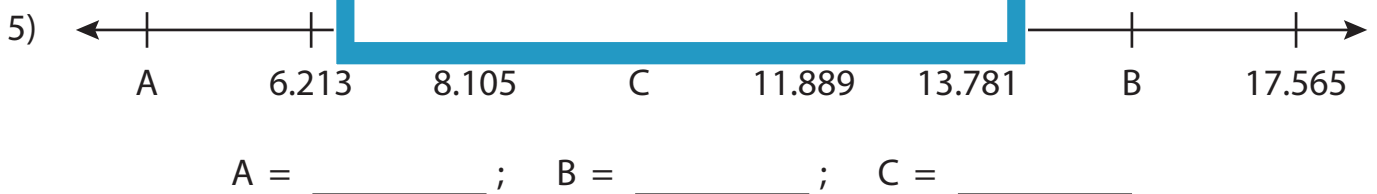
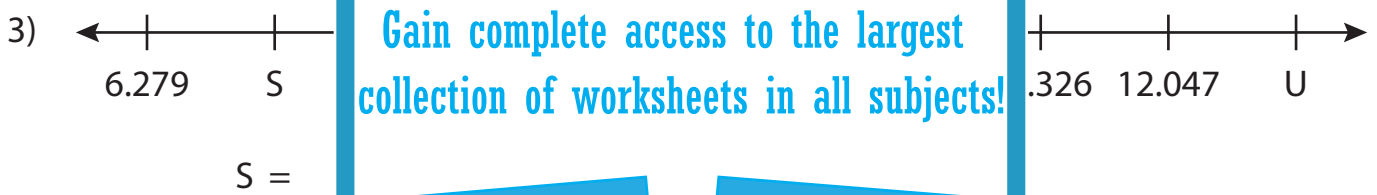
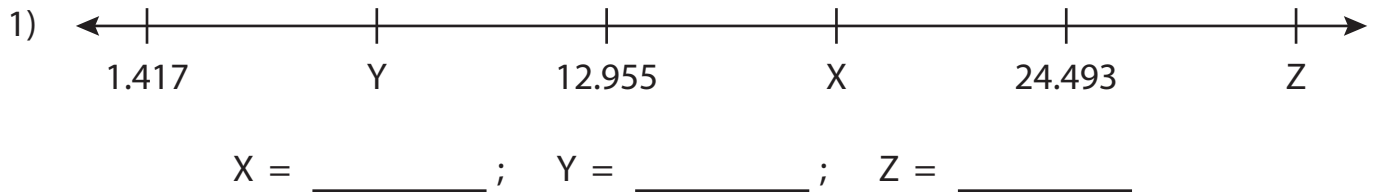


Name : _____

Missing Numbers

Thousandth: T3S5

What numbers do the letters in each number line represent?



PREVIEW

Gain complete access to the largest collection of worksheets in all subjects!

Members, please log in to download this worksheet.

Not a member? Please sign up to gain complete access.

www.mathworksheets4kids.com

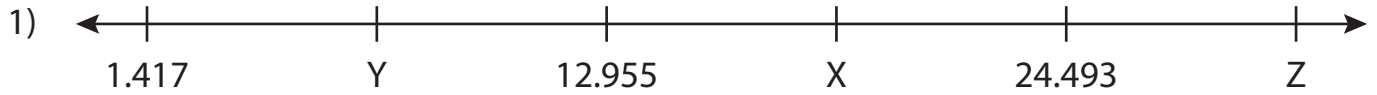
Name : _____

Answer key

Missing Numbers

Thousandth: T3S5

What numbers do the letters in each number line represent?



X = 18.724 ; Y = 7.186 ; Z = 30.262



C = 573



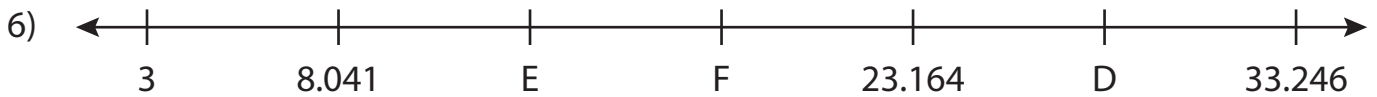
S = .768



P = 896



A = 4.321 ; B = 15.673 ; C = 9.997



D = 28.205 ; E = 13.082 ; F = 18.123

PREVIEW

Gain complete access to the largest collection of worksheets in all subjects!

Members, please log in to download this worksheet.

Not a member? Please sign up to gain complete access.

www.mathworksheets4kids.com