

Name : \_\_\_\_\_

# Number Line Multiplication

Hundredth: S1

Indicate hops on each number line and complete the multiplication sentences.

1)  $2.12 \times 5 = \underline{\hspace{2cm}}$



2)  $5.25 \times 2 = \underline{\hspace{2cm}}$




3)  $1.61 \times \underline{\hspace{1cm}} = \underline{\hspace{2cm}}$



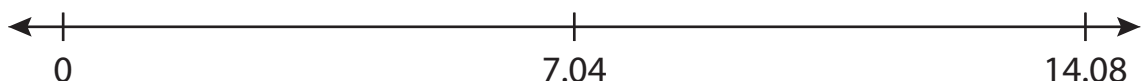
4)  $0.96 \times \underline{\hspace{1cm}} = \underline{\hspace{2cm}}$



5)  $9.47 \times \underline{\hspace{1cm}} = \underline{\hspace{2cm}}$



6)  $7.04 \times 2 = \underline{\hspace{2cm}}$



**PREVIEW**

Gain complete access to the largest collection of worksheets in all subjects!

Members, please log in to download this worksheet.

Not a member? Please sign up to gain complete access.

[www.mathworksheets4kids.com](http://www.mathworksheets4kids.com)

Name : \_\_\_\_\_

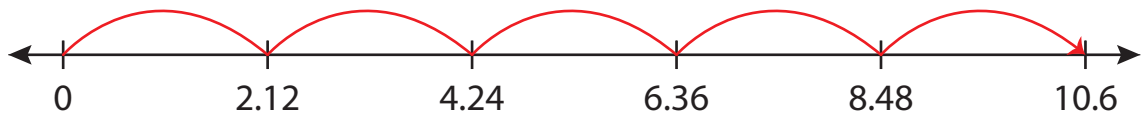
## Answer key

# Number Line Multiplication

Hundredth: S1

Indicate hops on each number line and complete the multiplication sentences.

1)  $2.12 \times 5 = \underline{10.6}$



2)  $5.25 \times 3 = \underline{15.75}$




3)  $1.61 \times 8 = \underline{12.88}$



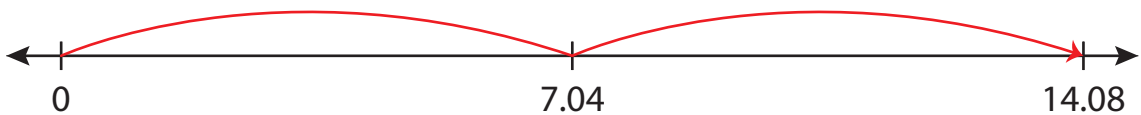
4)  $0.96 \times 6 = \underline{5.76}$



5)  $9.47 \times 3 = \underline{28.41}$



6)  $7.04 \times 2 = \underline{14.08}$



**PREVIEW**

Gain complete access to the largest collection of worksheets in all subjects!

Members, please log in to download this worksheet.

Not a member? Please sign up to gain complete access.

[www.mathworksheets4kids.com](http://www.mathworksheets4kids.com)