

Name : _____

Number Line Multiplication

Hundredth: S2

Indicate hops on each number line and complete the multiplication sentences.

1) $7.09 \times 2 =$ _____



2) $0.34 \times 6 =$ _____



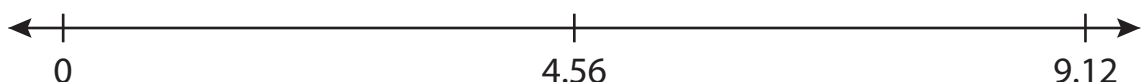
3) $6.62 \times 4 =$ _____




4) $3.18 \times 6 =$ _____



5) $4.56 \times 2 =$ _____



6) $5.43 \times 5 =$ _____



PREVIEW

Access the largest collection of worksheets for just **\$19.95** per year!

Members, please log in to download this worksheet. **Log in**

Not a member? Please sign up to gain complete access. **Sign up**

www.mathworksheets4kids.com

Name : _____


Answer key

Number Line Multiplication

Hundredth: S2

Indicate hops on each number line and complete the multiplication sentences.

1) $7.09 \times 2 = \underline{14.18}$



2) $0.34 \times 6 = \underline{2.04}$



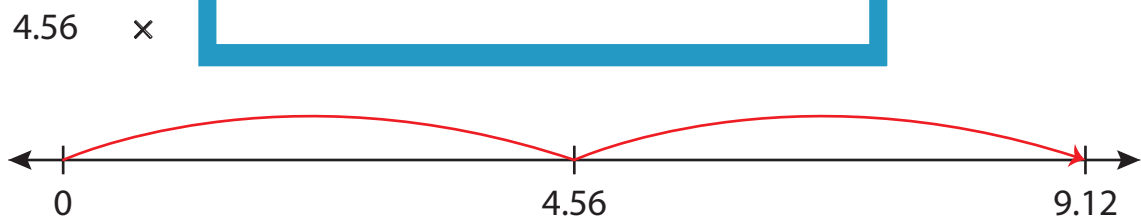
3) $6.62 \times 4 = \underline{26.48}$



4) $3.18 \times 7 = \underline{22.26}$



5) $4.56 \times 2 = \underline{9.12}$



6) $5.43 \times 5 = \underline{27.15}$

