

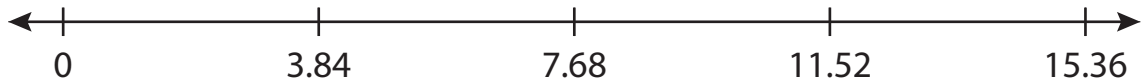
Name : _____

Number Line Multiplication

Hundredth: S3

Indicate hops on each number line and complete the multiplication sentences.

1) $3.84 \times 4 =$ _____



2) $4.75 \times 6 =$ _____



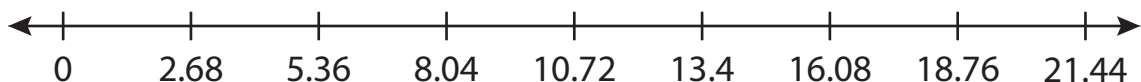
3) $8.16 \times$ _____




4) $1.92 \times$ _____



5) $2.68 \times$ _____



6) $0.59 \times 7 =$ _____



PREVIEW

Access the largest collection of worksheets for just **\$19.95** per year!

Members, please log in to download this worksheet. **Log in**

Not a member? Please sign up to gain complete access. **Sign up**

www.mathworksheets4kids.com

Name : _____

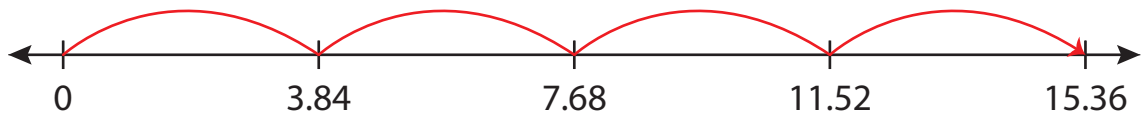
Answer key

Number Line Multiplication

Hundredth: S3

Indicate hops on each number line and complete the multiplication sentences.

1) $3.84 \times 4 = \underline{15.36}$



2) $4.75 \times 6 = \underline{28.5}$



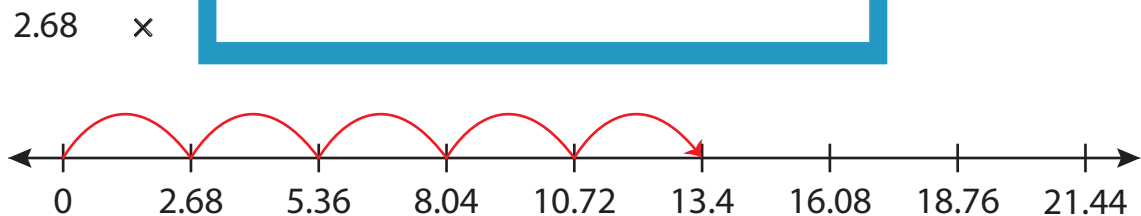
3) $8.16 \times$



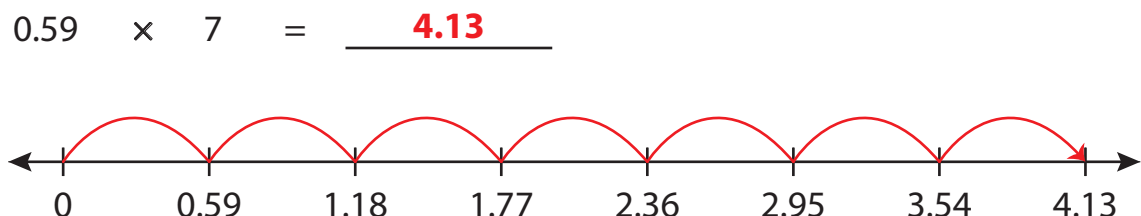
4) $1.92 \times$



5) $2.68 \times$



6) $0.59 \times 7 = \underline{4.13}$



PREVIEW

Access the largest collection of worksheets for just **\$19.95** per year!

Members, please log in to download this worksheet. **Log in**

Not a member? Please sign up to gain complete access. **Sign up**

www.mathworksheets4kids.com