

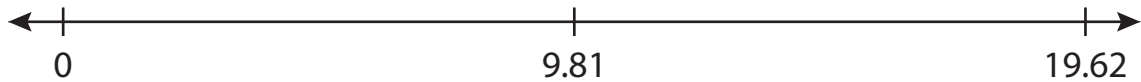
Name : _____

Number Line Multiplication

Hundredth: S4

Indicate hops on each number line and complete the multiplication sentences.

1) $9.81 \times 1 =$ _____



2) $7.14 \times 4 =$ _____



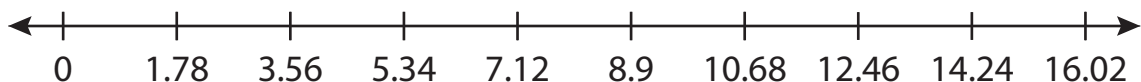
3) $3.09 \times 3 =$ _____



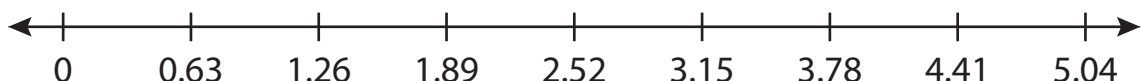
4) $5.57 \times 4 =$ _____



5) $1.78 \times 8 =$ _____



6) $0.63 \times 8 =$ _____



PREVIEW

Access the largest collection of worksheets for just **\$19.95** per year!

Members, please log in to download this worksheet. **Log in**

Not a member? Please sign up to gain complete access. **Sign up**

www.mathworksheets4kids.com

Name : _____

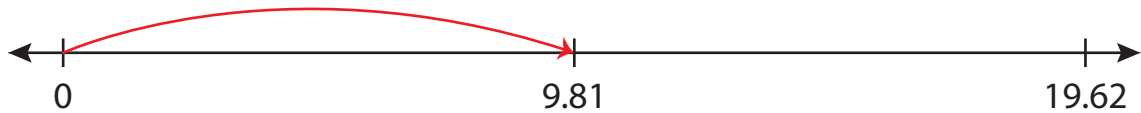
Answer key

Number Line Multiplication

Hundredth: S4

Indicate hops on each number line and complete the multiplication sentences.

1) $9.81 \times 1 = \underline{9.81}$



2) $7.14 \times 4 = \underline{28.56}$



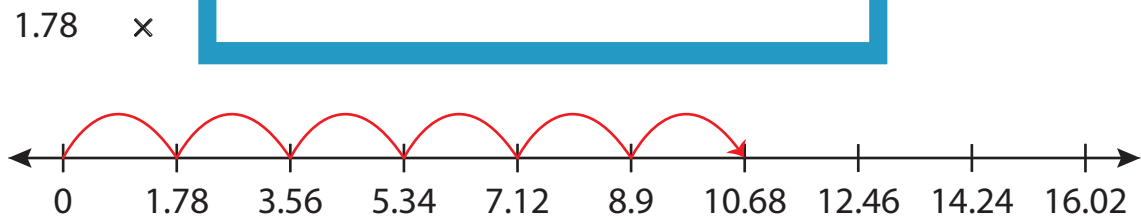
3) $3.09 \times 7 = \underline{21.63}$



4) $5.57 \times 4 = \underline{22.28}$



5) $1.78 \times 6 = \underline{10.68}$



6) $0.63 \times 8 = \underline{5.04}$

