

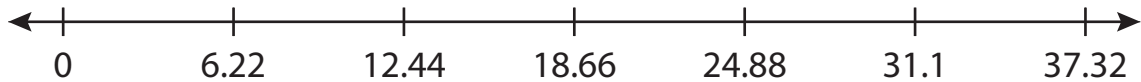
Name : _____

Number Line Multiplication

Hundredth: S5

Indicate hops on each number line and complete the multiplication sentences.

1) $6.22 \times 3 =$ _____



2) $2.05 \times 5 =$ _____



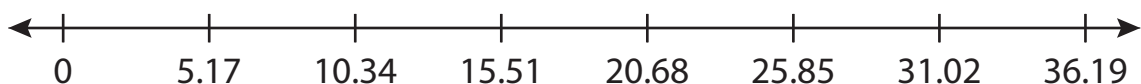
3) $1.64 \times$ _____



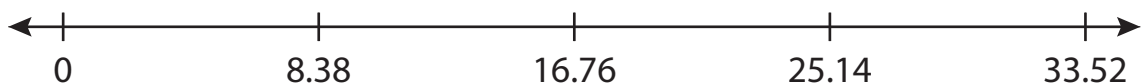
4) $9.73 \times$ _____



5) $5.17 \times$ _____



6) $8.38 \times 4 =$ _____



PREVIEW

Access the largest collection of worksheets for just **\$19.95** per year!

Members, please log in to download this worksheet. **Log in**

Not a member? Please sign up to gain complete access. **Sign up**

www.mathworksheets4kids.com

Name : _____

Answer key

Number Line Multiplication

Hundredth: S5

Indicate hops on each number line and complete the multiplication sentences.

1) $6.22 \times 3 = \underline{18.66}$



2) $2.05 \times 5 = \underline{10.25}$



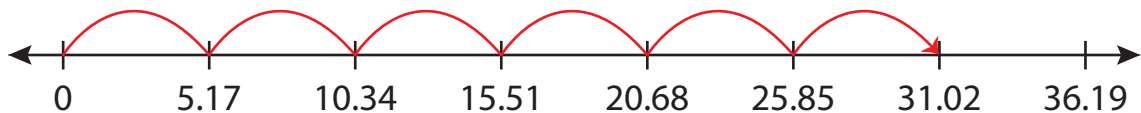
3) $1.64 \times 3 = \underline{4.92}$



4) $9.73 \times 3 = \underline{29.19}$



5) $5.17 \times 6 = \underline{31.02}$



6) $8.38 \times 4 = \underline{33.52}$



PREVIEW

Access the largest collection of worksheets for just **\$19.95** per year!

Members, please log in to download this worksheet. **Log in**

Not a member? Please sign up to gain complete access. **Sign up**

www.mathworksheets4kids.com