

Name : \_\_\_\_\_

## Number Line Multiplication

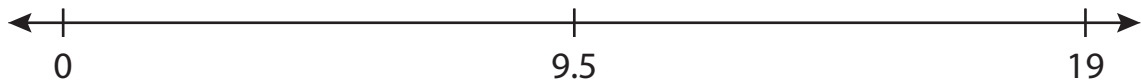
Tenth: S1

Indicate hops on each number line and complete the multiplication sentences.

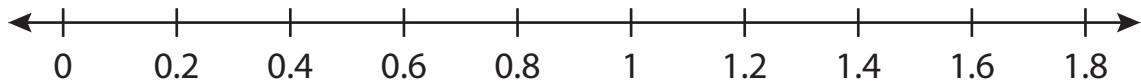
1)  $1.3 \times 4 =$  \_\_\_\_\_




2)  $9.5 \times 2 =$  \_\_\_\_\_



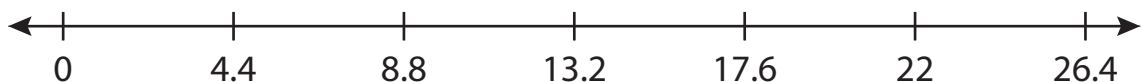
3)  $0.2 \times 9 =$  \_\_\_\_\_



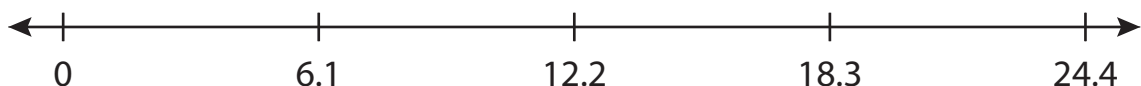
4)  $2.8 \times 5 =$  \_\_\_\_\_



5)  $4.4 \times 6 =$  \_\_\_\_\_



6)  $6.1 \times 3 =$  \_\_\_\_\_



Name : \_\_\_\_\_

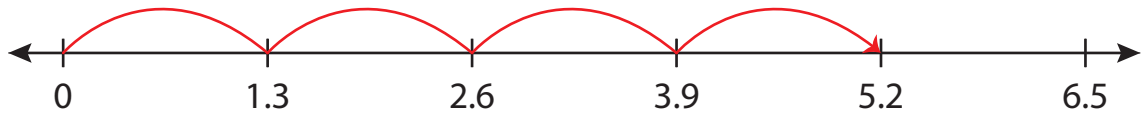
## Answer key

# Number Line Multiplication

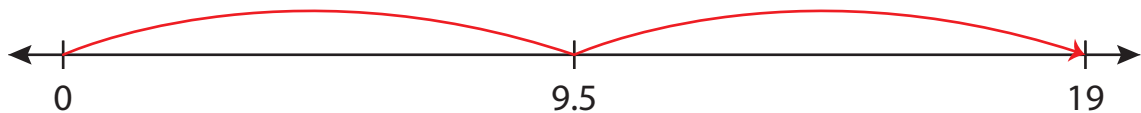
Tenth: S1

Indicate hops on each number line and complete the multiplication sentences.

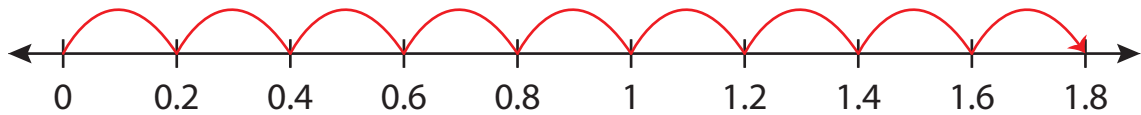
1)  $1.3 \times 4 = \underline{5.2}$



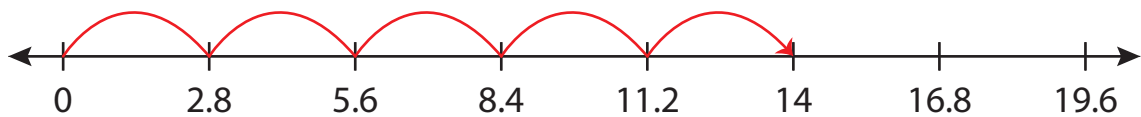
2)  $9.5 \times 2 = \underline{19}$



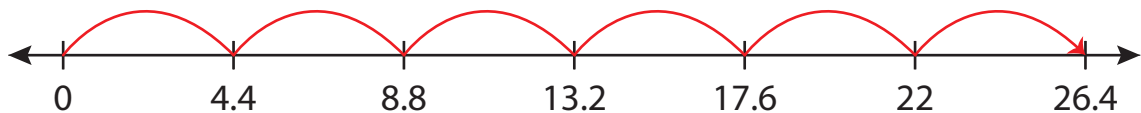
3)  $0.2 \times 9 = \underline{1.8}$



4)  $2.8 \times 5 = \underline{14}$



5)  $4.4 \times 6 = \underline{26.4}$



6)  $6.1 \times 3 = \underline{18.3}$

