

Name : _____

Number Line Multiplication

Tenth: S3

Indicate hops on each number line and complete the multiplication sentences.

1) $7.4 \times 2 = \underline{\hspace{2cm}}$



2) $4.8 \times 5 = \underline{\hspace{2cm}}$



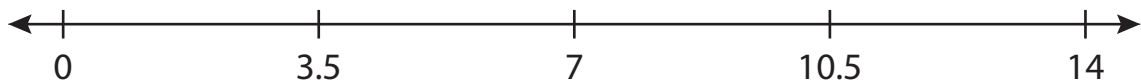
3) $1.6 \times 4 = \underline{\hspace{2cm}}$



4) $0.7 \times 6 = \underline{\hspace{2cm}}$



5) $3.5 \times 3 = \underline{\hspace{2cm}}$



6) $2.2 \times 8 = \underline{\hspace{2cm}}$



PREVIEW

Access the largest collection of worksheets for just **\$19.95** per year!

Members, please log in to download this worksheet. **Log in**

Not a member? Please sign up to gain complete access. **Sign up**

www.mathworksheets4kids.com

Name : _____


Answer key

Tenth: S3

Number Line Multiplication

Indicate hops on each number line and complete the multiplication sentences.

1) $7.4 \times 2 = \underline{14.8}$



2) $4.8 \times 5 = \underline{24}$



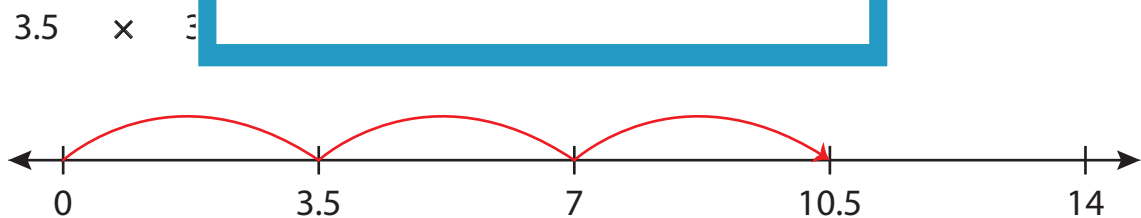
3) $1.6 \times 4 = \underline{6.4}$



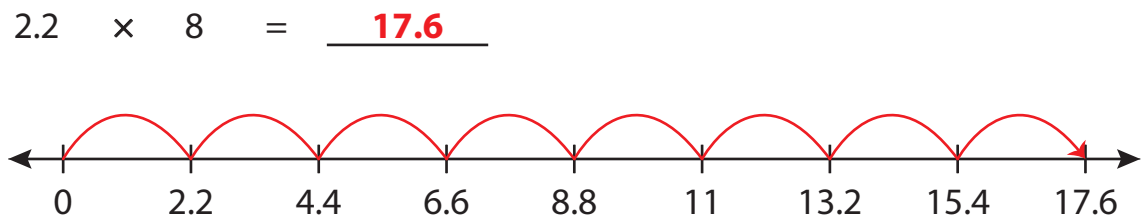
4) $0.7 \times 6 = \underline{4.2}$



5) $3.5 \times 3 = \underline{10.5}$



6) $2.2 \times 8 = \underline{17.6}$



PREVIEW

Access the largest collection of worksheets for just **\$19.95** per year!

Members, please log in to download this worksheet. **Log in**

Not a member? Please sign up to gain complete access. **Sign up**

www.mathworksheets4kids.com