


Name : _____

Number Line Multiplication

Tenth: S4

Indicate hops on each number line and complete the multiplication sentences.

1) $0.5 \times 9 =$ _____



2) $3.2 \times 6 =$ _____




3) $9.4 \times 2 =$ _____




4) $6.3 \times 4 =$ _____



5) $7.6 \times 3 =$ _____



6) $5.1 \times 7 =$ _____



PREVIEW

Access the largest collection of worksheets for just **\$19.95** per year!

Members, please log in to download this worksheet. **Log in**

Not a member? Please sign up to gain complete access. **Sign up**

www.mathworksheets4kids.com

Name : _____

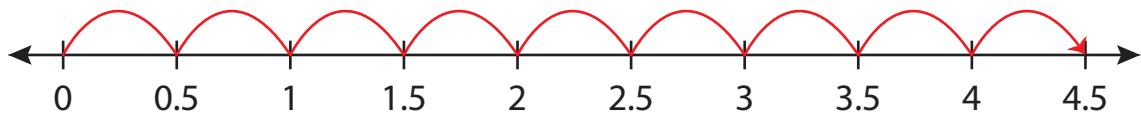
Answer key

Tenth: S4

Number Line Multiplication

Indicate hops on each number line and complete the multiplication sentences.

1) $0.5 \times 9 = \underline{4.5}$



2) $3.2 \times 6 = \underline{19.2}$



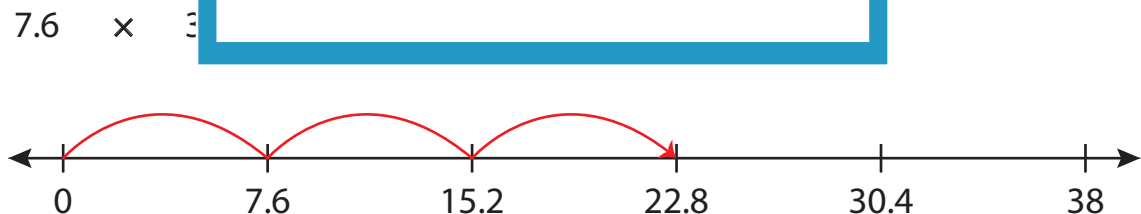
3) $9.4 \times 2 = \underline{18.8}$



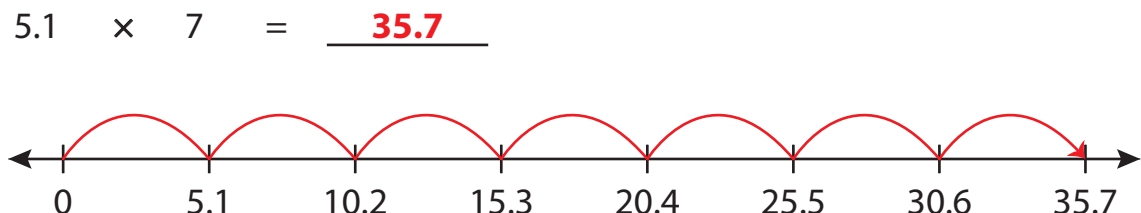
4) $6.3 \times 4 = \underline{25.2}$



5) $7.6 \times 3 = \underline{22.8}$



6) $5.1 \times 7 = \underline{35.7}$



PREVIEW

Access the largest collection of worksheets for just **\$19.95** per year!

Members, please log in to download this worksheet. **Log in**

Not a member? Please sign up to gain complete access. **Sign up**

www.mathworksheets4kids.com