

Name : _____

Multiplication Sentence - Missing Numbers

Hundredth: S1

Complete the multiplication sentence that describes each model.



$$1.62 \times 6 = \underline{\quad}$$



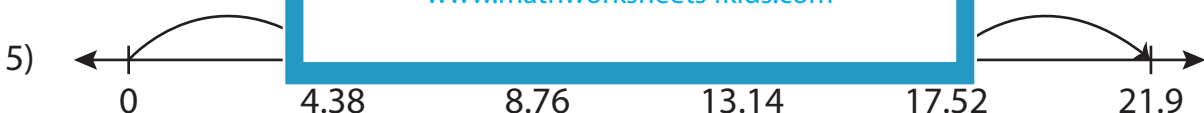
PREVIEW

Gain complete access to the largest collection of worksheets in all subjects!

Members, please log in to download this worksheet.

Not a member? Please sign up to gain complete access.

www.mathworksheets4kids.com



$$4.38 \times \underline{\quad} = 21.9$$



$$9.21 \times 2 = \underline{\quad}$$

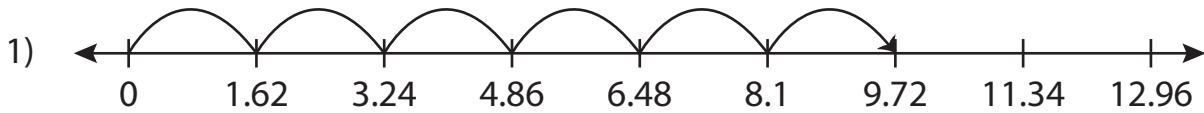
Name : _____

Answer key

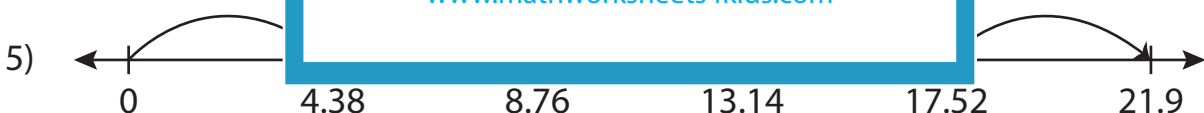
Multiplication Sentence - Missing Numbers

Hundredth: S1

Complete the multiplication sentence that describes each model.



$$1.62 \times 6 = \underline{9.72}$$



$$4.38 \times \underline{5} = 21.9$$



$$9.21 \times 2 = \underline{18.42}$$

PREVIEW

Gain complete access to the largest collection of worksheets in all subjects!

Members, please log in to download this worksheet.

Not a member? Please sign up to gain complete access.

www.mathworksheets4kids.com