

Name : _____

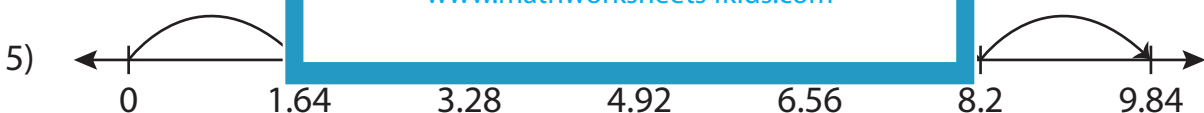
Multiplication Sentence - Missing Numbers

Hundredth: S3

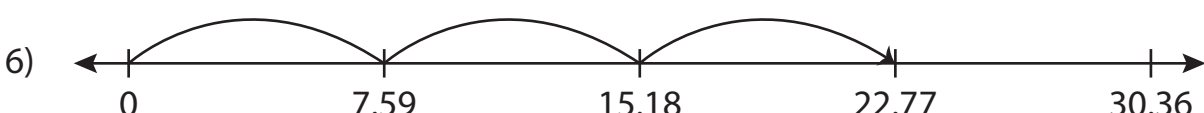
Complete the multiplication sentence that describes each model.



$$\underline{\quad} \times 2 = 16.9$$



$$1.64 \times 6 = \underline{\quad}$$



$$7.59 \times \underline{\quad} = 22.77$$

PREVIEW

Access the largest collection of
worksheets for just **\$19.95** per year!

Members, please
log in to
download this
worksheet.
Log in

Not a member?
Please sign up to
gain complete
access.
Sign up

www.mathworksheets4kids.com

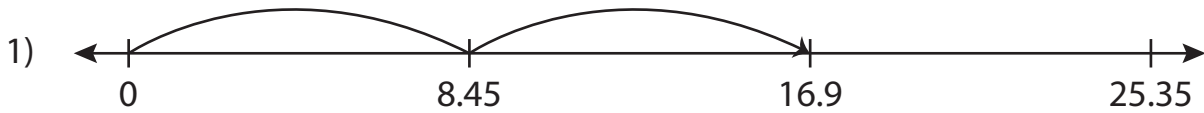
Name : _____

Answer key

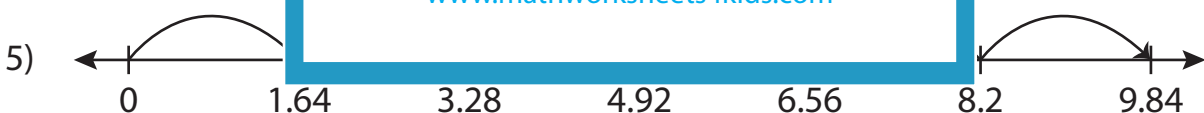
Multiplication Sentence - Missing Numbers

Hundredth: S3

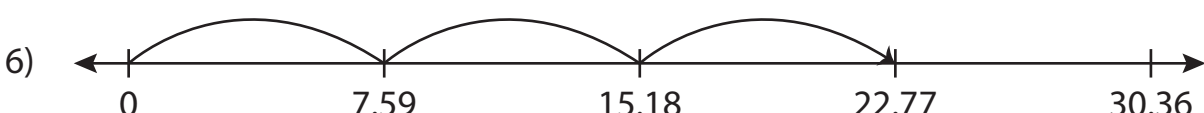
Complete the multiplication sentence that describes each model.



$$\underline{8.45} \times 2 = 16.9$$



$$1.64 \times 6 = \underline{9.84}$$



$$7.59 \times \underline{3} = 22.77$$

PREVIEW

Access the largest collection of worksheets for just **\$19.95** per year!

Members, please log in to download this worksheet. **Log in**

Not a member? Please sign up to gain complete access. **Sign up**

www.mathworksheets4kids.com