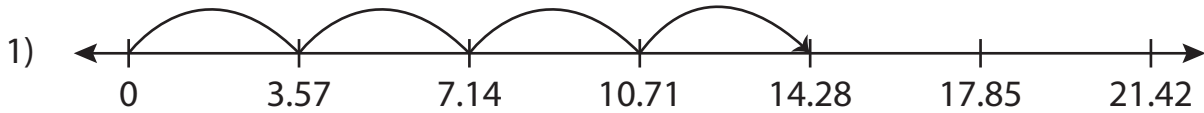


Name : \_\_\_\_\_


## Multiplication Sentence - Missing Numbers

Hundredth: S4

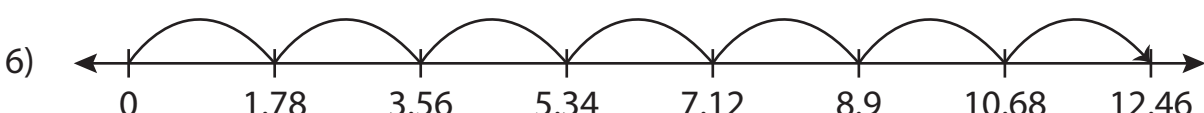
Complete the multiplication sentence that describes each model.



$$3.57 \times \underline{\quad} = 14.28$$



$$8.92 \times \underline{\quad} = 17.84$$



$$1.78 \times 7 = \underline{\quad}$$

**PREVIEW**

Access the largest collection of worksheets for just **\$19.95** per year!

Members, please log in to download this worksheet. **Log in**

Not a member? Please sign up to gain complete access. **Sign up**

[www.mathworksheets4kids.com](http://www.mathworksheets4kids.com)

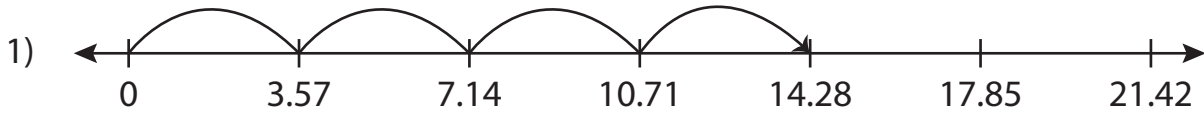
Name : \_\_\_\_\_

## Answer key


### Multiplication Sentence - Missing Numbers

Hundredth: S4

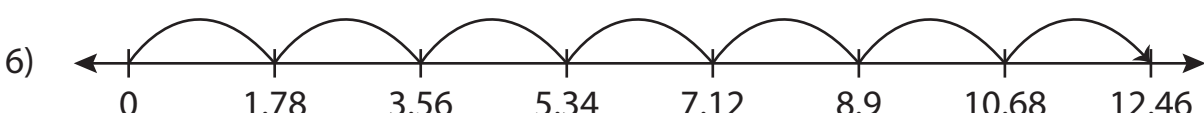
Complete the multiplication sentence that describes each model.



$$3.57 \times \underline{4} = 14.28$$



$$8.92 \times \underline{2} = 17.84$$



$$1.78 \times \underline{7} = \underline{12.46}$$

**PREVIEW**

Access the largest collection of worksheets for just **\$19.95** per year!

Members, please log in to download this worksheet. **Log in**

Not a member? Please sign up to gain complete access. **Sign up**

[www.mathworksheets4kids.com](http://www.mathworksheets4kids.com)