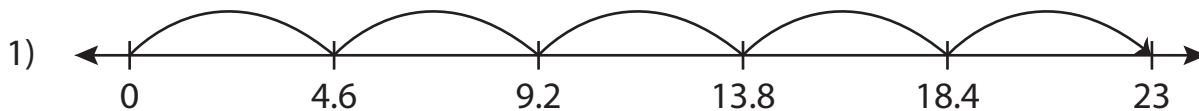


Name : _____

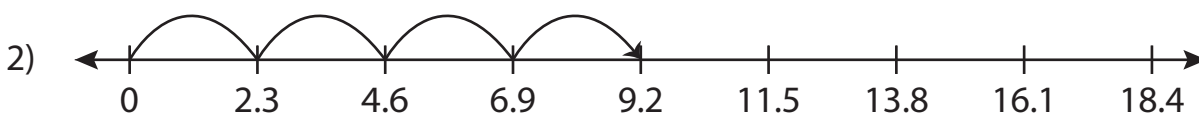
Multiplication Sentence - Missing Numbers

Tenth: S1

Complete the multiplication sentence that describes each model.



$$4.6 \times 5 = \underline{\quad}$$



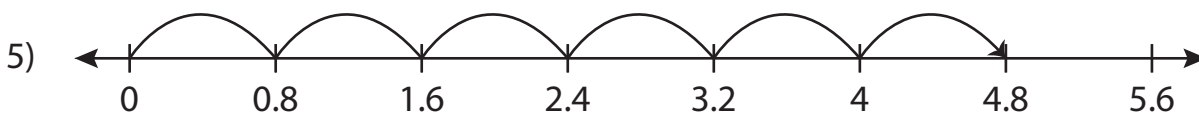
$$2.3 \times 4 = \underline{\quad}$$



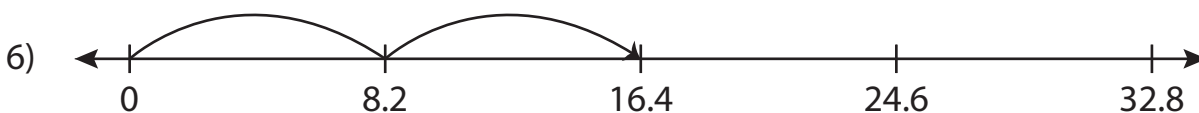
$$9.7 \times \underline{\quad} = 29.1$$



$$\underline{\quad} \times 7 = 11.2$$



$$0.8 \times \underline{\quad} = 4.8$$



$$\underline{\quad} \times 2 = 16.4$$

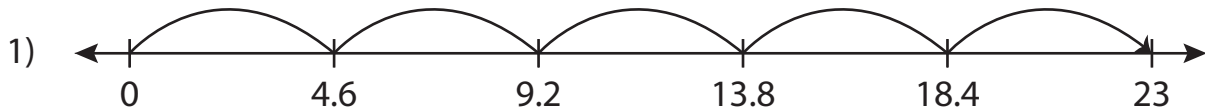
Name : _____

Answer key

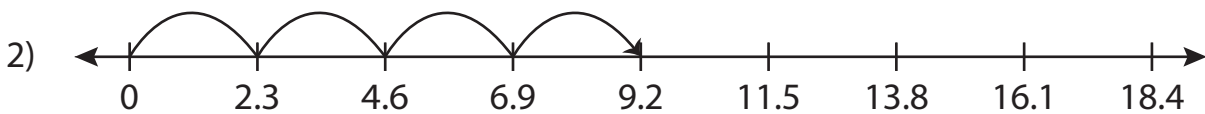
Multiplication Sentence - Missing Numbers

Tenth: S1

Complete the multiplication sentence that describes each model.



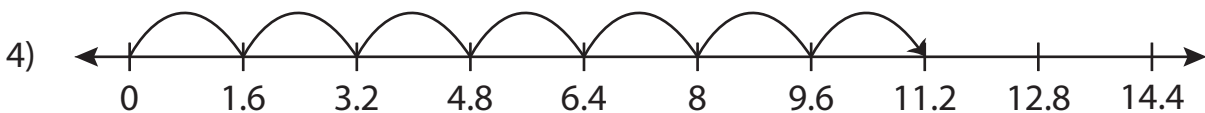
$$4.6 \times 5 = \underline{23}$$



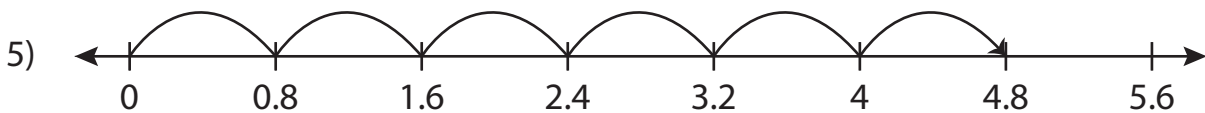
$$2.3 \times 4 = \underline{9.2}$$



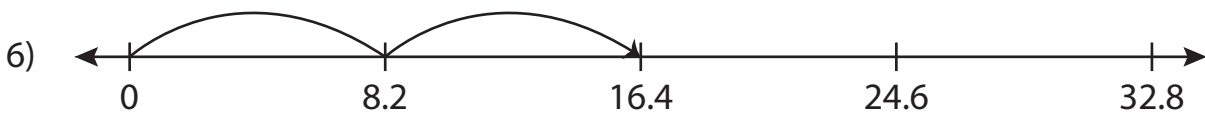
$$9.7 \times \underline{3} = 29.1$$



$$\underline{1.6} \times 7 = 11.2$$



$$0.8 \times \underline{6} = 4.8$$



$$\underline{8.2} \times 2 = 16.4$$