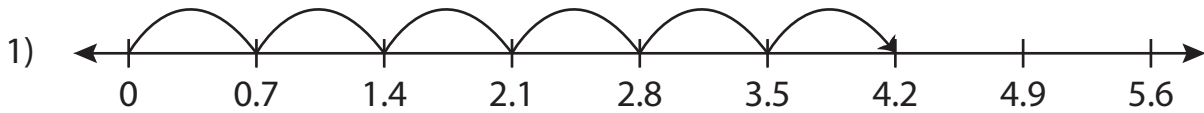


Name : _____

Multiplication Sentence - Missing Numbers

Tenth: S2

Complete the multiplication sentence that describes each model.



$$0.7 \times \underline{\quad} = 4.2$$



PREVIEW

Access the largest collection of worksheets for just **\$19.95** per year!

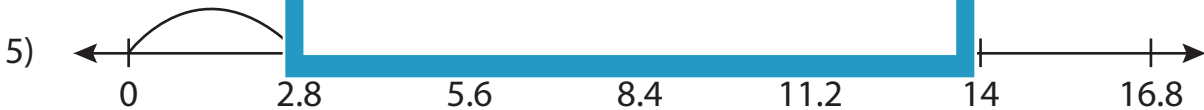
Members, please log in to download this worksheet.

Log in

Not a member? Please sign up to gain complete access.

Sign up

www.mathworksheets4kids.com



$$\underline{\quad} \times 2 = 5.6$$



$$4.3 \times 3 = \underline{\quad}$$

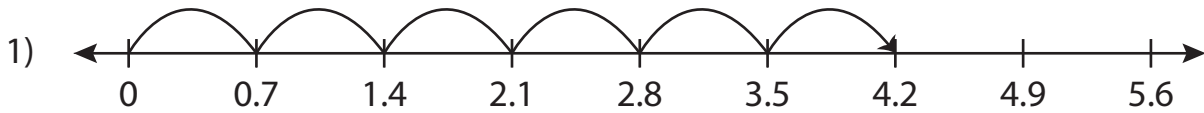
Name : _____

Answer key

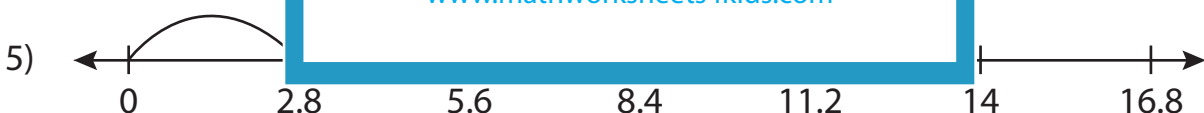
Multiplication Sentence - Missing Numbers

Tenth: S2

Complete the multiplication sentence that describes each model.



$$0.7 \times \underline{6} = 4.2$$



$$\underline{2.8} \times 2 = 5.6$$



$$4.3 \times 3 = \underline{12.9}$$

PREVIEW

Access the largest collection of worksheets for just **\$19.95** per year!

Members, please log in to download this worksheet. **Log in**

Not a member? Please sign up to gain complete access. **Sign up**

www.mathworksheets4kids.com