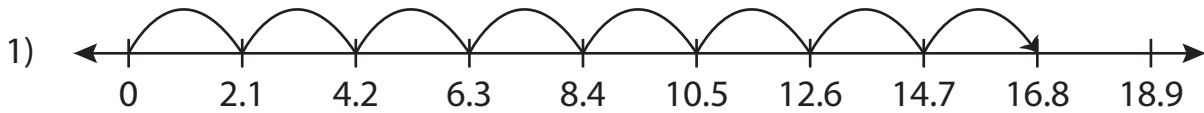


Name : _____

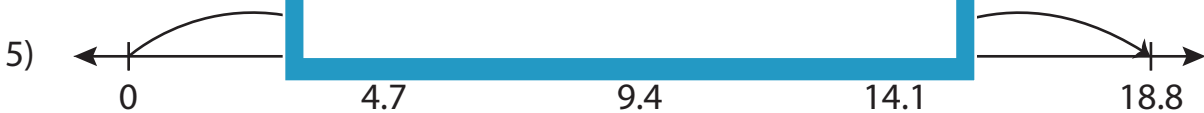
Multiplication Sentence - Missing Numbers

Tenth: S3

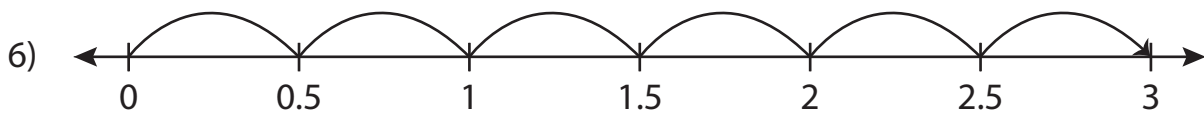
Complete the multiplication sentence that describes each model.



$$2.1 \times \underline{\quad} = 16.8$$



$$4.7 \times 4 = \underline{\quad}$$



$$0.5 \times \underline{\quad} = 3$$

PREVIEW

Access the largest collection of worksheets for just **\$19.95** per year!

Members, please log in to download this worksheet. **Log in**

Not a member? Please sign up to gain complete access. **Sign up**

www.mathworksheets4kids.com

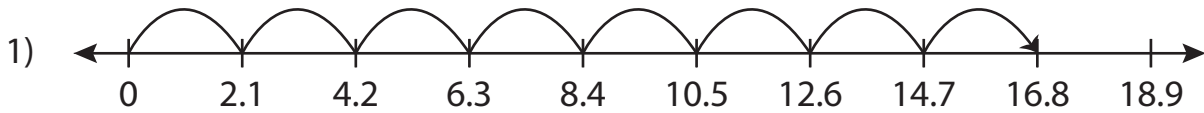
Name : _____

Answer key

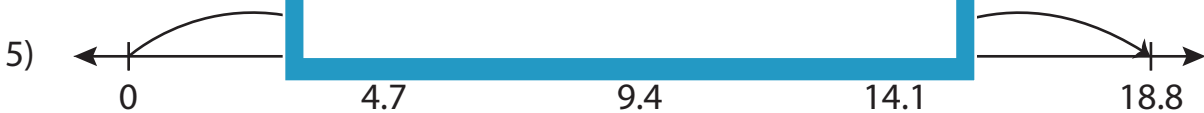
Multiplication Sentence - Missing Numbers

Tenth: S3

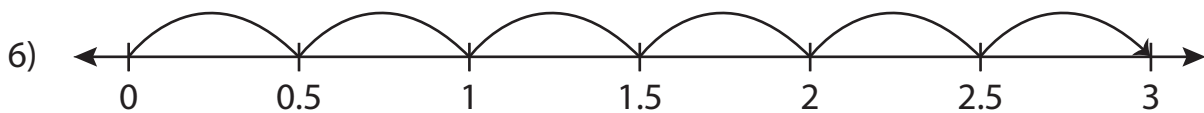
Complete the multiplication sentence that describes each model.



$$2.1 \times \underline{8} = 16.8$$



$$4.7 \times 4 = \underline{18.8}$$



$$0.5 \times \underline{6} = 3$$

PREVIEW

Access the largest collection of worksheets for just **\$19.95** per year!

Members, please log in to download this worksheet. **Log in**

Not a member? Please sign up to gain complete access. **Sign up**

www.mathworksheets4kids.com