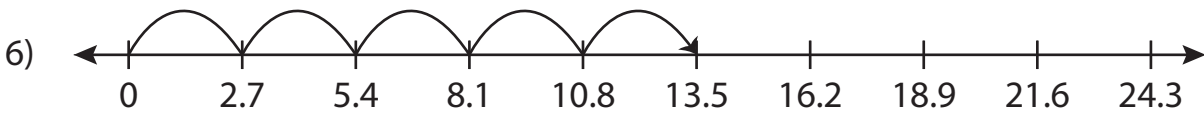
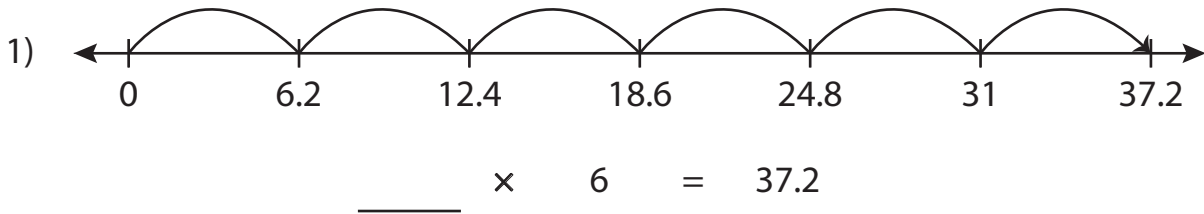


Name : _____

Multiplication Sentence - Missing Numbers

Tenth: S4

Complete the multiplication sentence that describes each model.



2.7 \times 5 = _____

PREVIEW

Access the largest collection of worksheets for just **\$19.95** per year!

Members, please log in to download this worksheet. **Log in**

Not a member? Please sign up to gain complete access. **Sign up**

www.mathworksheets4kids.com

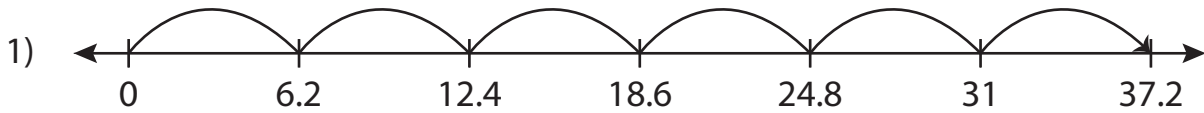
Name : _____

Answer key


Multiplication Sentence - Missing Numbers

Tenth: S4


Complete the multiplication sentence that describes each model.



$$\underline{6.2} \times 6 = 37.2$$



$$\underline{7.5} \times 2 = 15$$



$$2.7 \times 5 = \underline{13.5}$$

PREVIEW

Access the largest collection of worksheets for just **\$19.95** per year!

Members, please log in to download this worksheet. **Log in**

Not a member? Please sign up to gain complete access. **Sign up**

www.mathworksheets4kids.com