

Name : _____

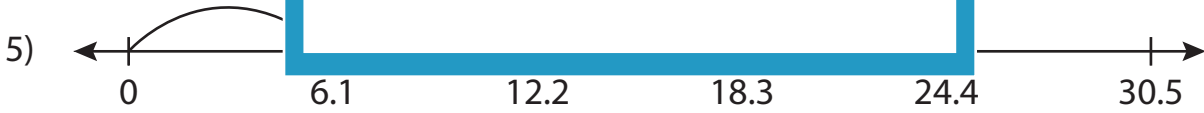
Multiplication Sentence - Missing Numbers

Tenth: S5

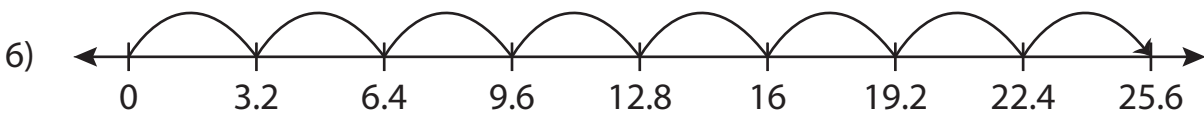
Complete the multiplication sentence that describes each model.



$$8.5 \times \underline{\quad} = 17$$



$$6.1 \times 3 = \underline{\quad}$$



$$\underline{\quad} \times 8 = 25.6$$

PREVIEW

Access the largest collection of worksheets for just **\$19.95** per year!

Members, please log in to download this worksheet. **Log in**

Not a member? Please sign up to gain complete access. **Sign up**

www.mathworksheets4kids.com

Name : _____

Answer key

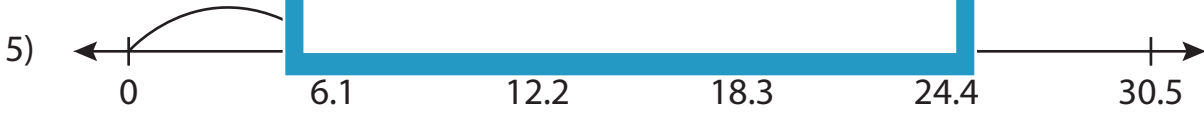
Multiplication Sentence - Missing Numbers

Tenth: S5

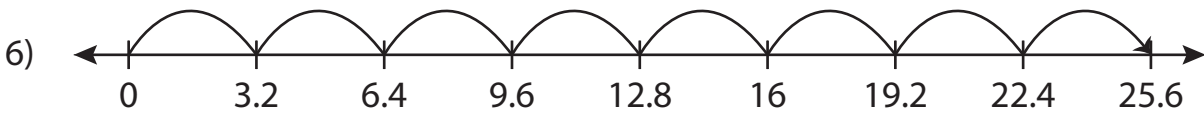
Complete the multiplication sentence that describes each model.



$$8.5 \times \underline{2} = 17$$



$$6.1 \times 3 = \underline{18.3}$$



$$\underline{3.2} \times 8 = 25.6$$

PREVIEW

Access the largest collection of worksheets for just **\$19.95** per year!

Members, please log in to download this worksheet. **Log in**

Not a member? Please sign up to gain complete access. **Sign up**

www.mathworksheets4kids.com