

Name : \_\_\_\_\_

## Multiplication Sentence

Hundredth: S1

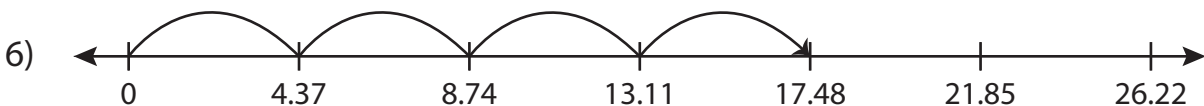
Write the multiplication sentence that describes each model.



\_\_\_\_\_ × \_\_\_\_\_ = \_\_\_\_\_



\_\_\_\_\_ × \_\_\_\_\_ = \_\_\_\_\_



\_\_\_\_\_ × \_\_\_\_\_ = \_\_\_\_\_

**PREVIEW**

Gain complete access to the largest collection of worksheets in all subjects!

Members, please log in to download this worksheet.

Not a member? Please sign up to gain complete access.

[www.mathworksheets4kids.com](http://www.mathworksheets4kids.com)

Name : \_\_\_\_\_

## Answer key

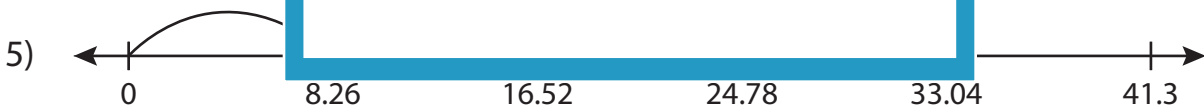
### Multiplication Sentence

Hundredth: S1

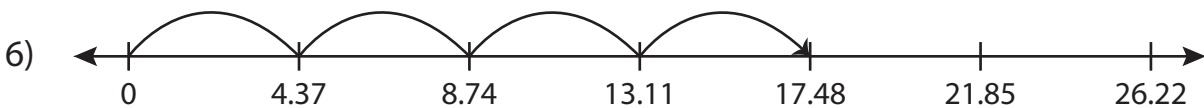
Write the multiplication sentence that describes each model.



$$\underline{0.91} \times \underline{9} = \underline{8.19}$$



$$\underline{8.26} \times \underline{2} = \underline{16.52}$$



$$\underline{4.37} \times \underline{4} = \underline{17.48}$$

**PREVIEW**

Gain complete access to the largest collection of worksheets in all subjects!

Members, please log in to download this worksheet.

Not a member? Please sign up to gain complete access.

[www.mathworksheets4kids.com](http://www.mathworksheets4kids.com)