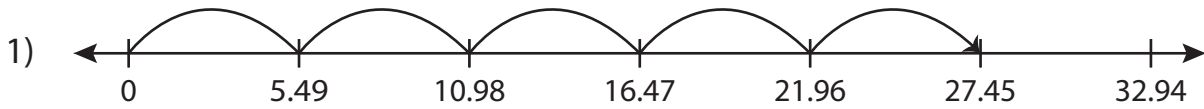


Name : _____

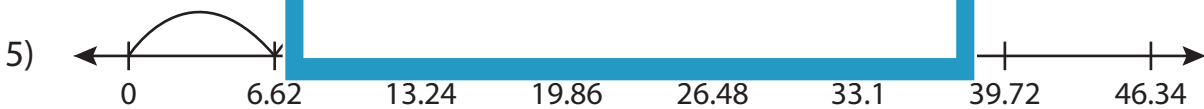
Multiplication Sentence

Hundredth: S3

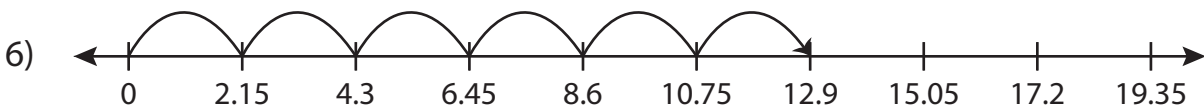
Write the multiplication sentence that describes each model.



$$\underline{\hspace{2cm}} \times \underline{\hspace{2cm}} = \underline{\hspace{2cm}}$$



$$\underline{\hspace{2cm}} \times \underline{\hspace{2cm}} = \underline{\hspace{2cm}}$$



$$\underline{\hspace{2cm}} \times \underline{\hspace{2cm}} = \underline{\hspace{2cm}}$$

PREVIEW

Access the largest collection of
worksheets for just **\$19.95** per year!

Members, please
log in to
download this
worksheet.

Log in

Not a member?
Please sign up to
gain complete
access.

Sign up

www.mathworksheets4kids.com

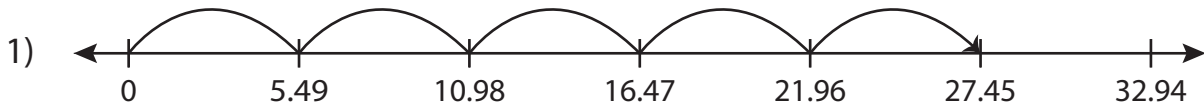
Name : _____

Answer key

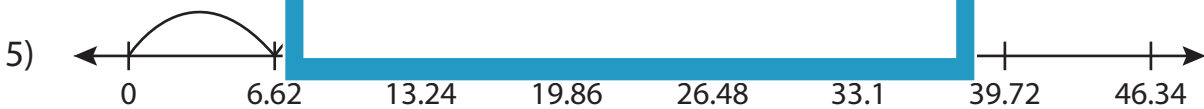
Multiplication Sentence

Hundredth: S3

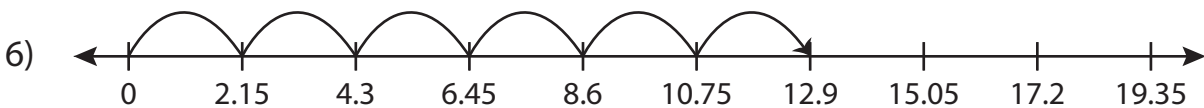
Write the multiplication sentence that describes each model.



$$\underline{5.49} \times \underline{5} = \underline{27.45}$$



$$\underline{6.62} \times \underline{4} = \underline{26.48}$$



$$\underline{2.15} \times \underline{6} = \underline{12.9}$$

PREVIEW

Access the largest collection of worksheets for just **\$19.95** per year!

Members, please log in to download this worksheet. **Log in**

Not a member? Please sign up to gain complete access. **Sign up**

www.mathworksheets4kids.com