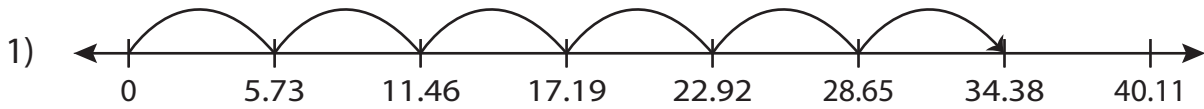


Name : _____

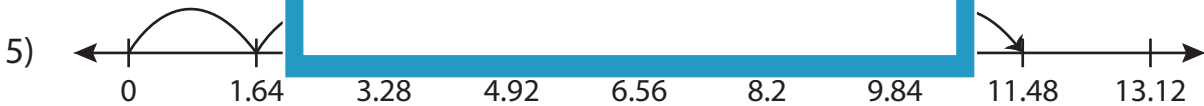
Multiplication Sentence

Hundredth: S5

Write the multiplication sentence that describes each model.



$$\underline{\hspace{2cm}} \times \underline{\hspace{2cm}} = \underline{\hspace{2cm}}$$



$$\underline{\hspace{2cm}} \times \underline{\hspace{2cm}} = \underline{\hspace{2cm}}$$



$$\underline{\hspace{2cm}} \times \underline{\hspace{2cm}} = \underline{\hspace{2cm}}$$

PREVIEW

Access the largest collection of
worksheets for just **\$19.95** per year!

Members, please
log in to
download this
worksheet.

Log in

Not a member?
Please sign up to
gain complete
access.

Sign up

www.mathworksheets4kids.com

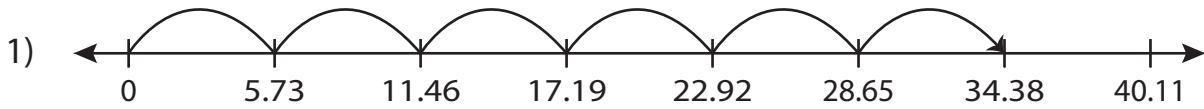
Name : _____

Answer key

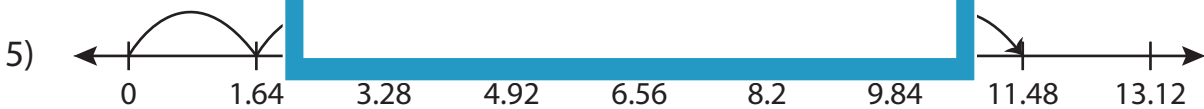
Multiplication Sentence

Hundredth: S5

Write the multiplication sentence that describes each model.



$$\underline{5.73} \times \underline{6} = \underline{34.38}$$



$$\underline{1.64} \times \underline{7} = \underline{11.48}$$



$$\underline{6.27} \times \underline{3} = \underline{18.81}$$

PREVIEW

Access the largest collection of worksheets for just **\$19.95** per year!

Members, please log in to download this worksheet. **Log in**

Not a member? Please sign up to gain complete access. **Sign up**

www.mathworksheets4kids.com