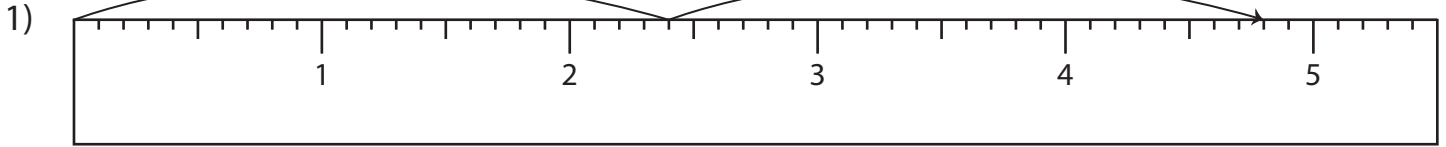


Name : _____

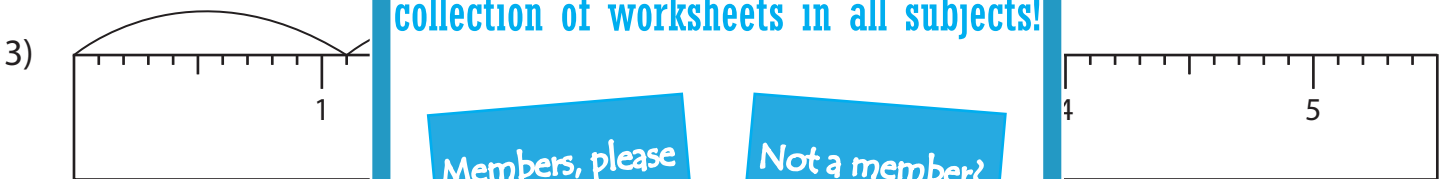
Multiplication Sentence - Ruler

Sheet 1

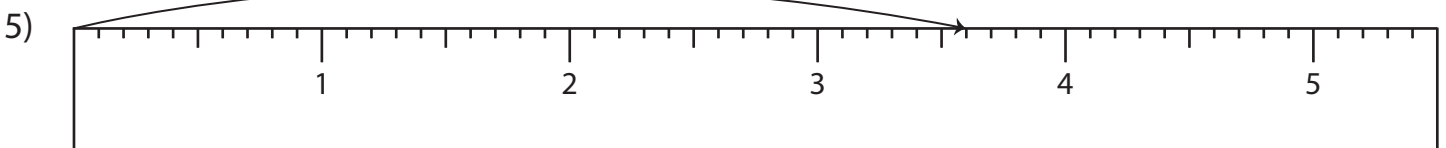
Read each ruler and write the multiplication sentences.



$$\underline{\quad} \times \underline{\quad} = \underline{\quad}$$



$$\underline{\quad} \times \underline{\quad} = \underline{\quad}$$



$$\underline{\quad} \times \underline{\quad} = \underline{\quad}$$

PREVIEW

Gain complete access to the largest collection of worksheets in all subjects!

Members, please log in to download this worksheet.

Not a member? Please sign up to gain complete access.

www.mathworksheets4kids.com

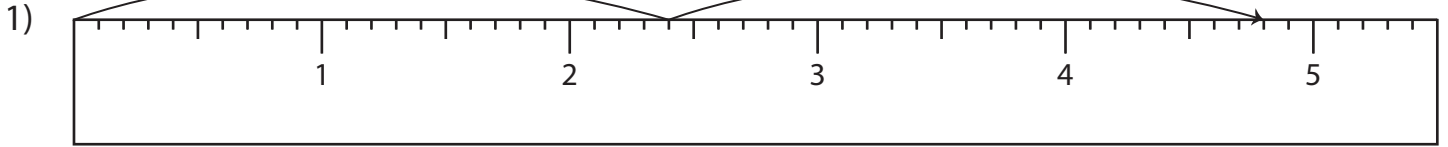
Name : _____

Answer key

Multiplication Sentence - Ruler

Sheet 1

Read each ruler and write the multiplication sentences.



$$\underline{2.4} \times \underline{2} = \underline{4.8}$$



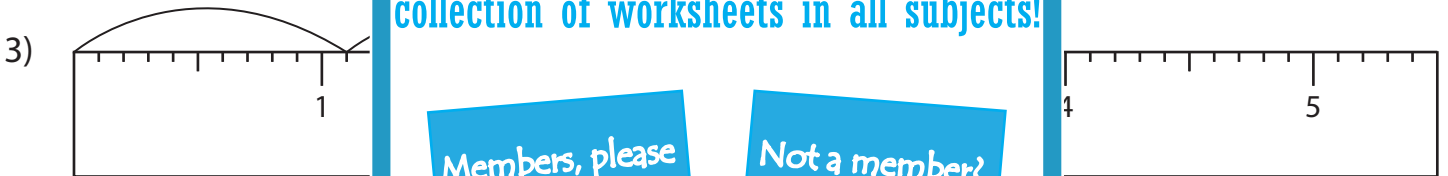
PREVIEW

Gain complete access to the largest collection of worksheets in all subjects!

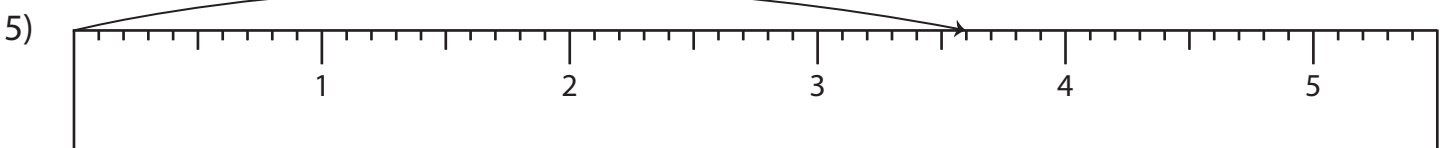
Members, please log in to download this worksheet.

Not a member? Please sign up to gain complete access.

www.mathworksheets4kids.com



$$\underline{0.7} \times \underline{4} = \underline{2.8}$$



$$\underline{3.6} \times \underline{1} = \underline{3.6}$$