

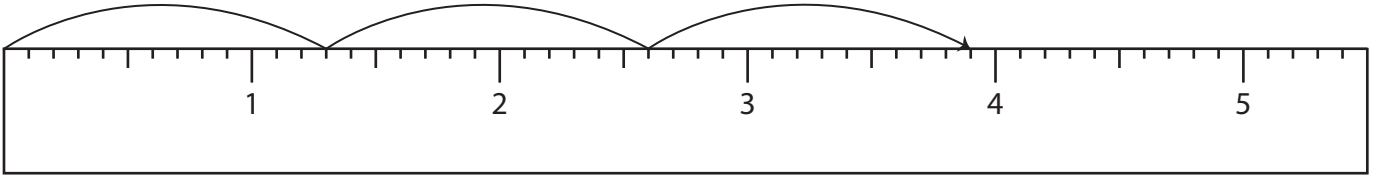
Name : _____

Multiplication Sentence - Ruler

Sheet 2

Read each ruler and write the multiplication sentences.

1)



$$\underline{\quad} \times \underline{\quad} = \underline{\quad}$$

2)



3)

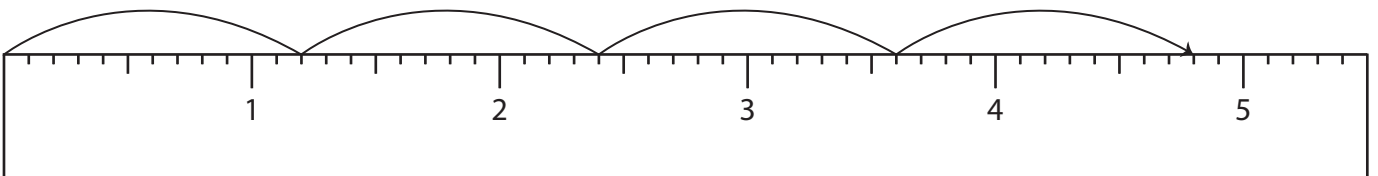


4)



$$\underline{\quad} \times \underline{\quad} = \underline{\quad}$$

5)



$$\underline{\quad} \times \underline{\quad} = \underline{\quad}$$

PREVIEW

Access the largest collection of worksheets for just **\$19.95** per year!

Members, please log in to download this worksheet. **Log in**

Not a member? Please sign up to gain complete access. **Sign up**

www.mathworksheets4kids.com

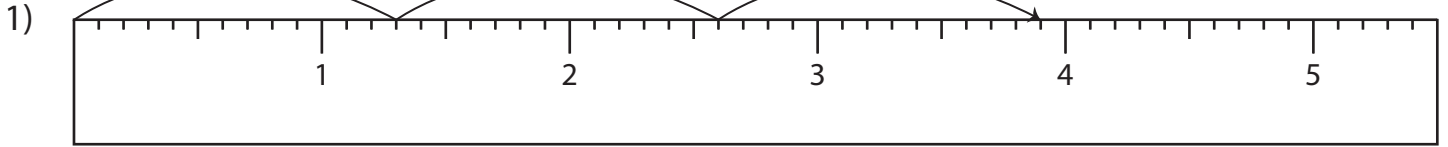
Name : _____

Answer key

Multiplication Sentence - Ruler

Sheet 2

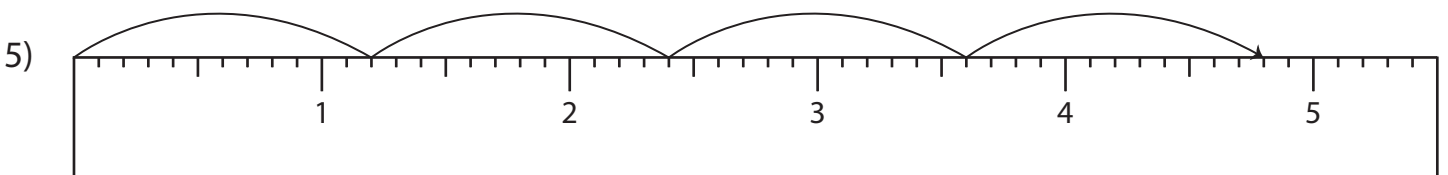
Read each ruler and write the multiplication sentences.



$$\underline{1.3} \times \underline{3} = \underline{3.9}$$



$$\underline{2.5} \times \underline{2} = \underline{5}$$



$$\underline{1.2} \times \underline{4} = \underline{4.8}$$

PREVIEW

Access the largest collection of worksheets for just **\$19.95** per year!

Members, please log in to download this worksheet.

Not a member? Please sign up to gain complete access.

www.mathworksheets4kids.com