

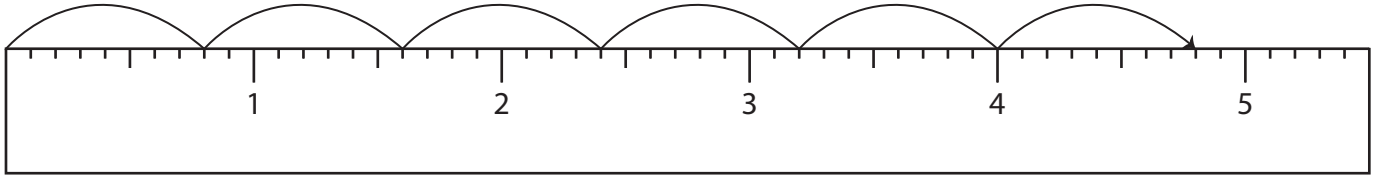
Name : _____

Multiplication Sentence - Ruler

Sheet 3

Read each ruler and write the multiplication sentences.

1)



$$\underline{\quad} \times \underline{\quad} = \underline{\quad}$$

2)



3)

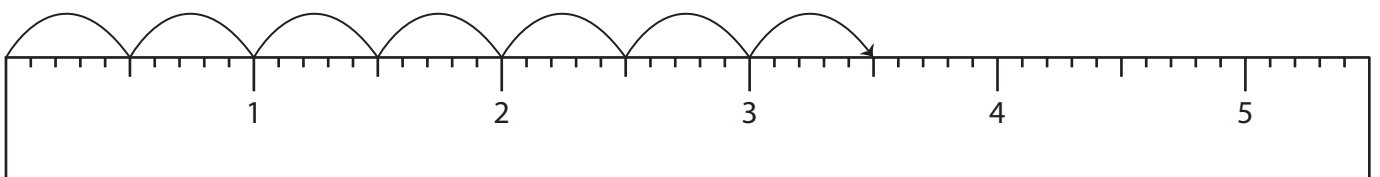


4)



$$\underline{\quad} \times \underline{\quad} = \underline{\quad}$$

5)



$$\underline{\quad} \times \underline{\quad} = \underline{\quad}$$

PREVIEW

Access the largest collection of worksheets for just **\$19.95** per year!

Members, please log in to download this worksheet. **Log in**

Not a member? Please sign up to gain complete access. **Sign up**

www.mathworksheets4kids.com

Name : _____

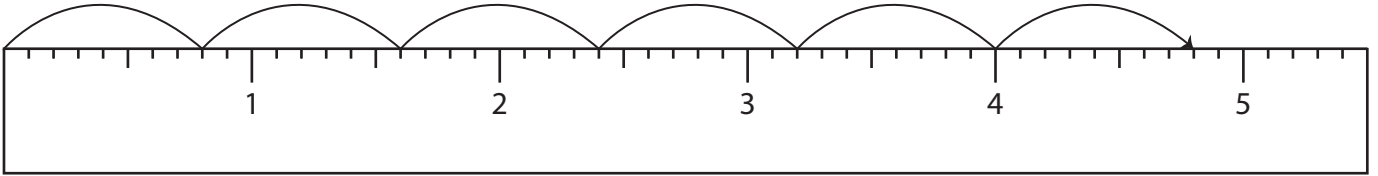
Answer key

Multiplication Sentence - Ruler

Sheet 3

Read each ruler and write the multiplication sentences.

1)



$$\underline{0.8} \times \underline{6} = \underline{4.8}$$

2)



3)

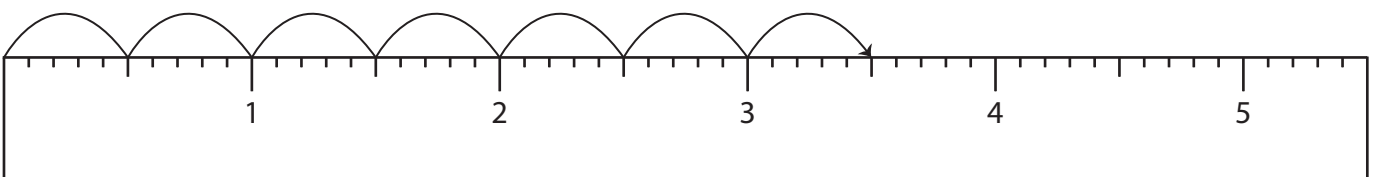


4)



$$\underline{1.4} \times \underline{3} = \underline{4.2}$$

5)



$$\underline{0.5} \times \underline{7} = \underline{3.5}$$

PREVIEW

Access the largest collection of worksheets for just **\$19.95** per year!

Members, please log in to download this worksheet.

Not a member? Please sign up to gain complete access.

www.mathworksheets4kids.com