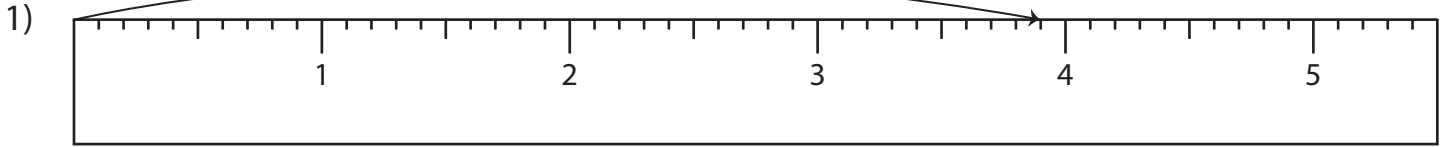


Name : \_\_\_\_\_

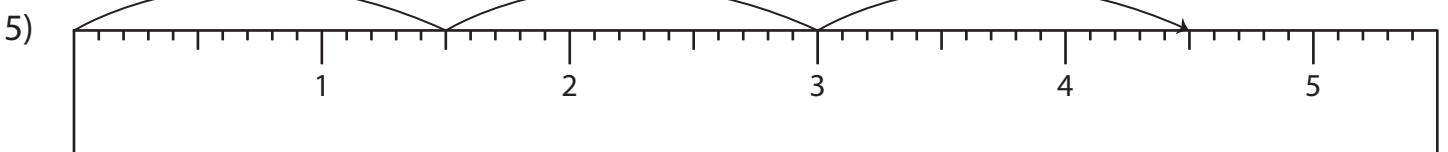
# Multiplication Sentence - Ruler

Sheet 4

Read each ruler and write the multiplication sentences.



$$\underline{\quad} \times \underline{\quad} = \underline{\quad}$$



$$\underline{\quad} \times \underline{\quad} = \underline{\quad}$$

**PREVIEW**

Access the largest collection of worksheets for just **\$19.95** per year!

Members, please log in to download this worksheet.

Not a member? Please sign up to gain complete access.

[www.mathworksheets4kids.com](http://www.mathworksheets4kids.com)

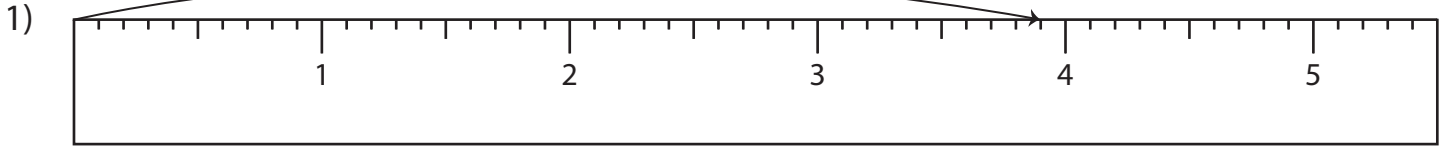
Name : \_\_\_\_\_

## Answer key

# Multiplication Sentence - Ruler

Sheet 4

Read each ruler and write the multiplication sentences.



$$\underline{3.9} \times \underline{1} = \underline{3.9}$$



**PREVIEW**

Access the largest collection of  
worksheets for just **\$19.95** per year!

Members, please  
log in to  
download this  
worksheet.

**Log in**

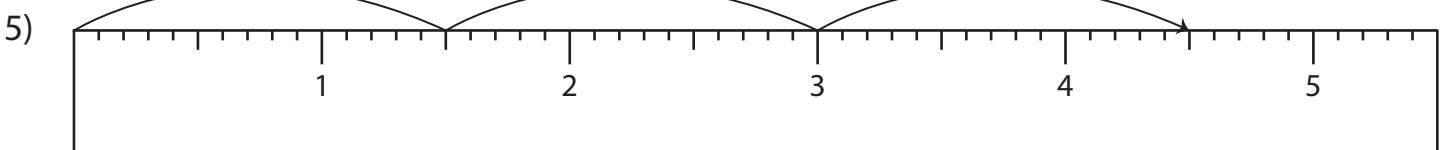
Not a member?  
Please sign up to  
gain complete  
access.

**Sign up**

[www.mathworksheets4kids.com](http://www.mathworksheets4kids.com)



$$\underline{0.6} \times \underline{5} = \underline{3}$$



$$\underline{1.5} \times \underline{3} = \underline{4.5}$$