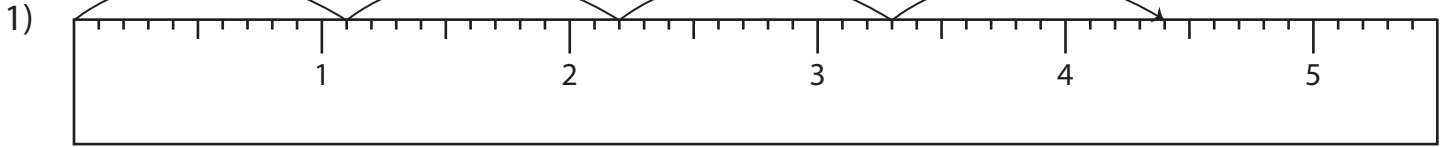


Name : \_\_\_\_\_

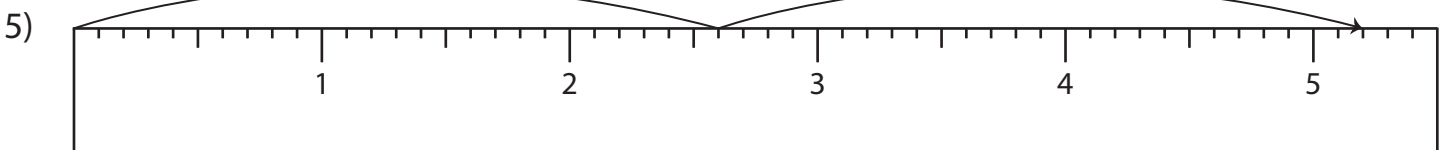
# Multiplication Sentence - Ruler

Sheet 5

Read each ruler and write the multiplication sentences.



$$\underline{\quad} \times \underline{\quad} = \underline{\quad}$$



$$\underline{\quad} \times \underline{\quad} = \underline{\quad}$$

**PREVIEW**

Access the largest collection of worksheets for just **\$19.95** per year!

Members, please log in to download this worksheet.

Not a member? Please sign up to gain complete access.

[Log in](#) [Sign up](#)

[www.mathworksheets4kids.com](http://www.mathworksheets4kids.com)

Name : \_\_\_\_\_

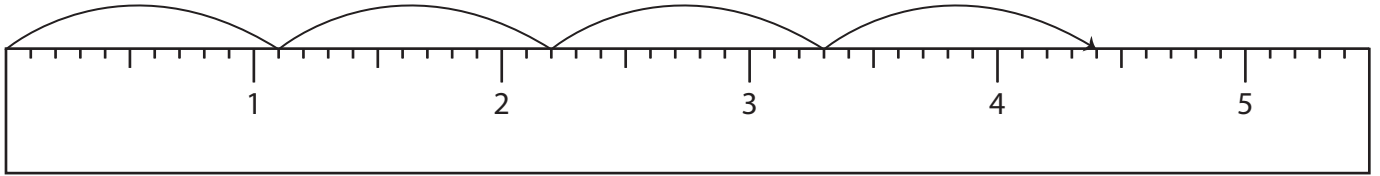
## Answer key

# Multiplication Sentence - Ruler

Sheet 5

Read each ruler and write the multiplication sentences.

1)



$$\underline{1.1} \times \underline{4} = \underline{4.4}$$

2)



3)

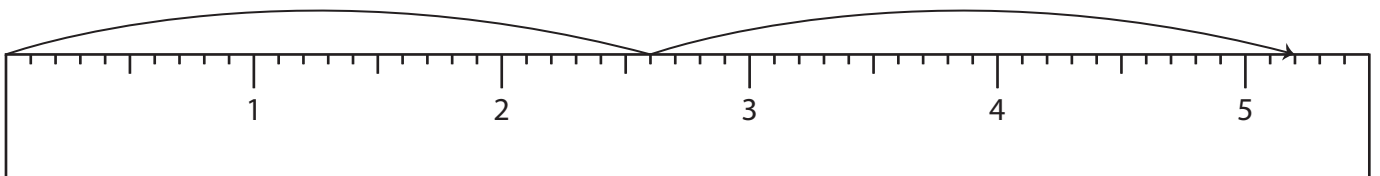


4)



$$\underline{3.8} \times \underline{1} = \underline{3.8}$$

5)



$$\underline{2.6} \times \underline{2} = \underline{5.2}$$

**PREVIEW**

Access the largest collection of worksheets for just **\$19.95** per year!

Members, please log in to download this worksheet.

Not a member? Please sign up to gain complete access.

[www.mathworksheets4kids.com](http://www.mathworksheets4kids.com)