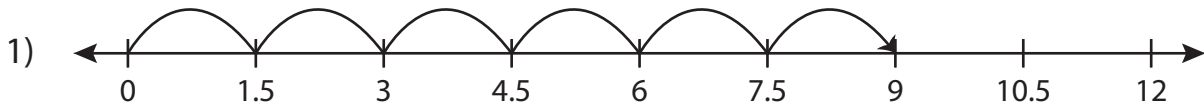


Name : _____

Multiplication Sentence

Tenth: S1

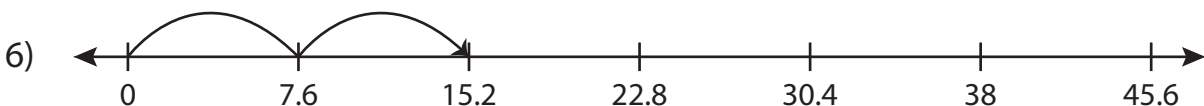
Write the multiplication sentence that describes each model.



$$\underline{\quad} \times \underline{\quad} = \underline{\quad}$$



$$\underline{\quad} \times \underline{\quad} = \underline{\quad}$$



$$\underline{\quad} \times \underline{\quad} = \underline{\quad}$$

PREVIEW

Gain complete access to the largest collection of worksheets in all subjects!

Members, please log in to download this worksheet.

Not a member? Please sign up to gain complete access.

www.mathworksheets4kids.com

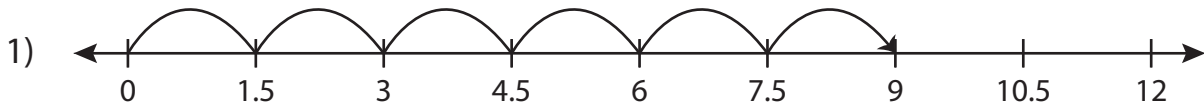
Name : _____

Answer key

Multiplication Sentence

Tenth: S1

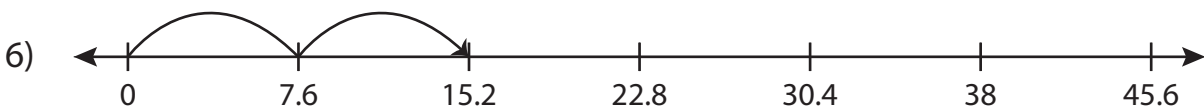
Write the multiplication sentence that describes each model.



$$\underline{1.5} \times \underline{6} = \underline{9}$$



$$\underline{9.2} \times \underline{5} = \underline{46}$$



$$\underline{7.6} \times \underline{2} = \underline{15.2}$$

PREVIEW

Gain complete access to the largest collection of worksheets in all subjects!

Members, please log in to download this worksheet.

Not a member? Please sign up to gain complete access.

www.mathworksheets4kids.com