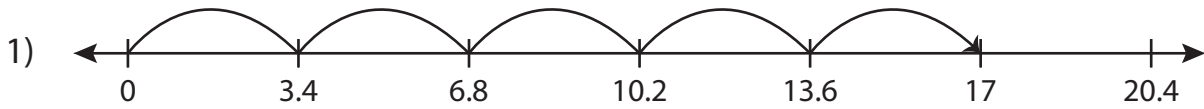


Name : \_\_\_\_\_

## Multiplication Sentence

Tenth: S2

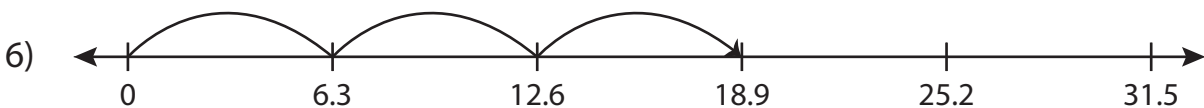
Write the multiplication sentence that describes each model.



$$\underline{\quad} \times \underline{\quad} = \underline{\quad}$$



$$\underline{\quad} \times \underline{\quad} = \underline{\quad}$$



$$\underline{\quad} \times \underline{\quad} = \underline{\quad}$$

**PREVIEW**

Access the largest collection of worksheets for just **\$19.95** per year!

Members, please log in to download this worksheet. **Log in**

Not a member? Please sign up to gain complete access. **Sign up**

[www.mathworksheets4kids.com](http://www.mathworksheets4kids.com)

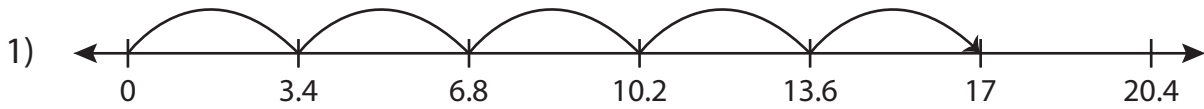
Name : \_\_\_\_\_

## Answer key

### Multiplication Sentence

Tenth: S2

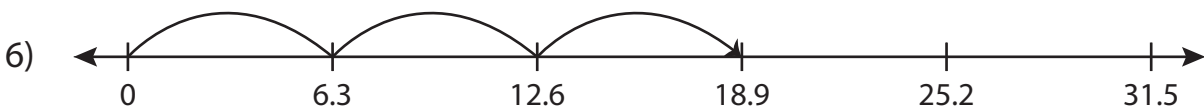
Write the multiplication sentence that describes each model.



$$\underline{3.4} \times \underline{5} = \underline{17}$$



$$\underline{0.9} \times \underline{7} = \underline{6.3}$$



$$\underline{6.3} \times \underline{3} = \underline{18.9}$$

**PREVIEW**

Access the largest collection of worksheets for just **\$19.95** per year!

Members, please log in to download this worksheet. **Log in**

Not a member? Please sign up to gain complete access. **Sign up**

[www.mathworksheets4kids.com](http://www.mathworksheets4kids.com)