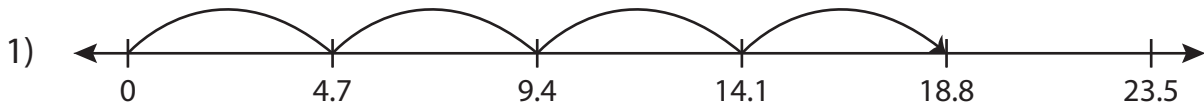


Name : _____

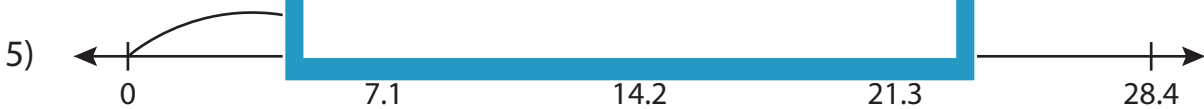
Multiplication Sentence

Tenth: S3

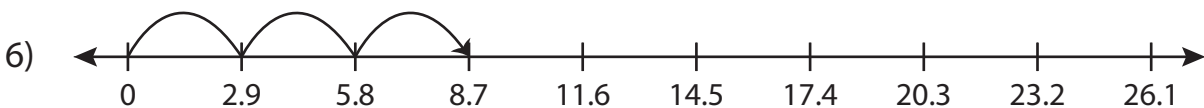
Write the multiplication sentence that describes each model.



$$\underline{\hspace{2cm}} \times \underline{\hspace{2cm}} = \underline{\hspace{2cm}}$$



$$\underline{\hspace{2cm}} \times \underline{\hspace{2cm}} = \underline{\hspace{2cm}}$$



$$\underline{\hspace{2cm}} \times \underline{\hspace{2cm}} = \underline{\hspace{2cm}}$$

PREVIEW

Access the largest collection of worksheets for just **\$19.95** per year!

Members, please log in to download this worksheet. **Log in**

Not a member? Please sign up to gain complete access. **Sign up**

www.mathworksheets4kids.com

Name : _____

Answer key

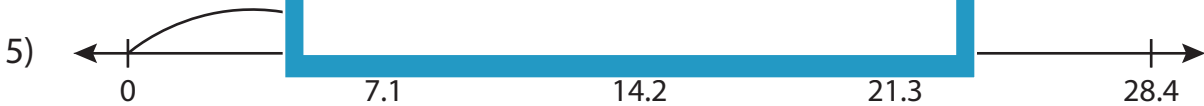
Multiplication Sentence

Tenth: S3

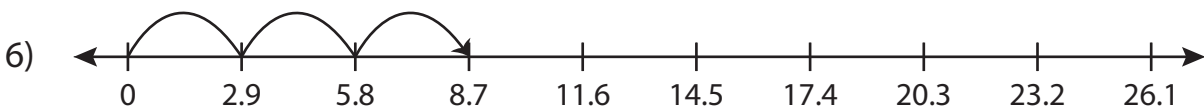
Write the multiplication sentence that describes each model.



$$\underline{4.7} \times \underline{4} = \underline{18.8}$$



$$\underline{7.1} \times \underline{2} = \underline{14.2}$$



$$\underline{2.9} \times \underline{3} = \underline{8.7}$$

PREVIEW

Access the largest collection of worksheets for just **\$19.95** per year!

Members, please log in to download this worksheet.
Log in

Not a member? Please sign up to gain complete access.
Sign up

www.mathworksheets4kids.com