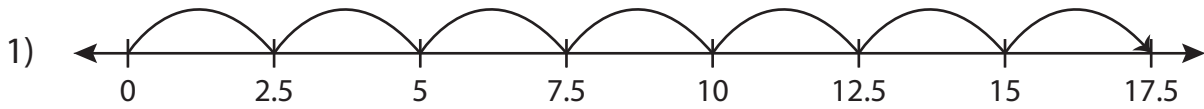


Name : \_\_\_\_\_

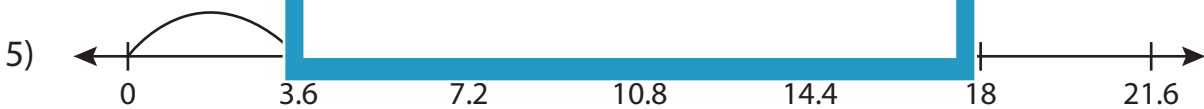
## Multiplication Sentence

Tenth: S4

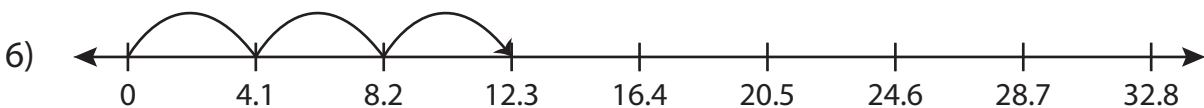
Write the multiplication sentence that describes each model.



$$\underline{\quad} \times \underline{\quad} = \underline{\quad}$$



$$\underline{\quad} \times \underline{\quad} = \underline{\quad}$$



$$\underline{\quad} \times \underline{\quad} = \underline{\quad}$$

**PREVIEW**

Access the largest collection of worksheets for just **\$19.95** per year!

Members, please log in to download this worksheet. **Log in**

Not a member? Please sign up to gain complete access. **Sign up**

[www.mathworksheets4kids.com](http://www.mathworksheets4kids.com)

Name : \_\_\_\_\_

## Answer key

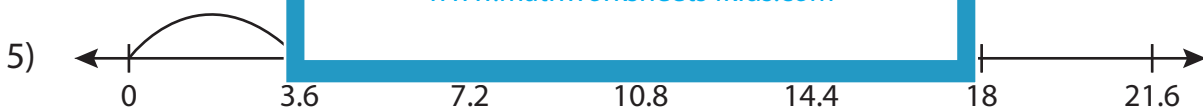
### Multiplication Sentence

Tenth: S4

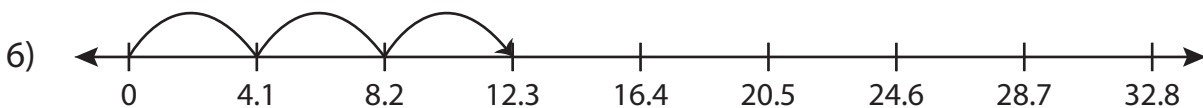
Write the multiplication sentence that describes each model.



$$\underline{2.5} \times \underline{7} = \underline{17.5}$$



$$\underline{3.6} \times \underline{4} = \underline{14.4}$$



$$\underline{4.1} \times \underline{6} = \underline{24.6}$$

# PREVIEW

Access the largest collection of worksheets for just **\$19.95** per year!

Members, please log in to download this worksheet.

**Log in**

Not a member? Please sign up to gain complete access.

**Sign up**

[www.mathworksheets4kids.com](http://www.mathworksheets4kids.com)