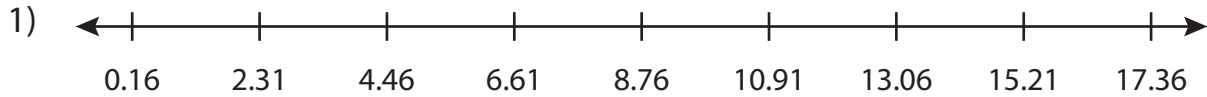


Name : _____

Number Line

Hundredth: S2

Read the number line and answer the following.



- a) Move 7 units to the left from 15.21 on the number line. Now, move 4 units to the right. At what number will you land?

- b) What is _____
line?

PREVIEW

Gain complete access to the largest
collection of worksheets in all subjects!

- c) If you n
will you

Members, please
log in to
download this
worksheet.

Not a member?
Please sign up to
gain complete
access.

- d) How m
numbe

www.mathworksheets4kids.com

- e) Hop 8 units to the left from 17.36 on the number line. At what number will you land?

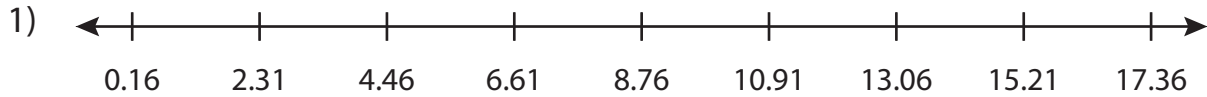
Name : _____

Answer key

Number Line

Hundredth: S2

Read the number line and answer the following.



- a) Move 7 units to the left from 15.21 on the number line. Now, move 4 units to the right. At what number will you land?

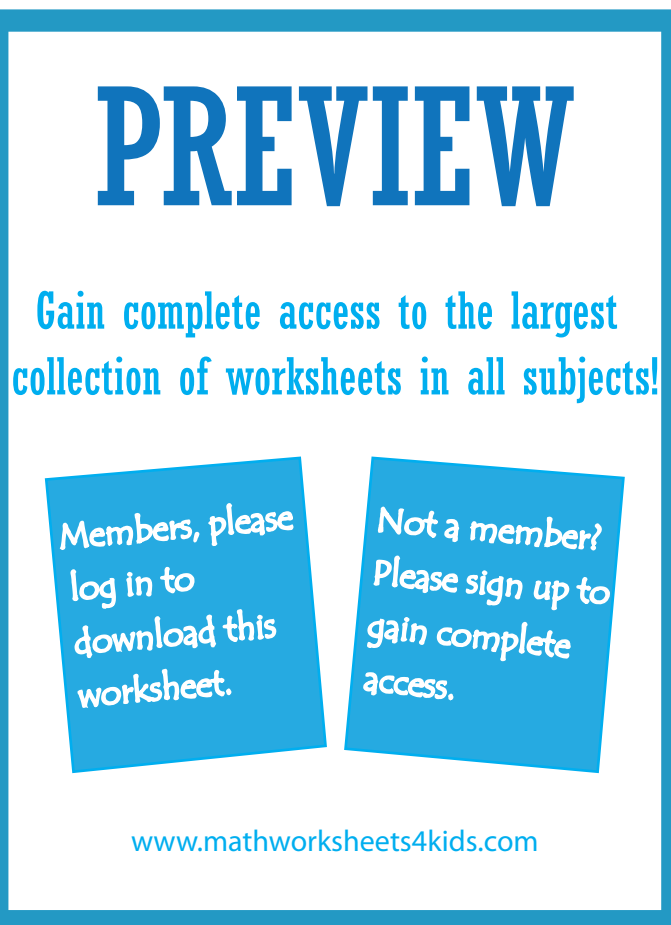
- b) What is _____ on the number line?

- c) If you n _____ will you _____

- d) How m _____ number _____

- e) Hop 8 units to the left from 17.36 on the number line. At what number will you land?

0.16



PREVIEW

Gain complete access to the largest collection of worksheets in all subjects!

Members, please log in to download this worksheet.

Not a member? Please sign up to gain complete access.

www.mathworksheets4kids.com

_____ on the number

_____ at what number

_____ from 4.46 on the