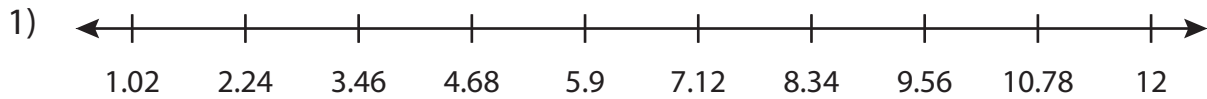


Name : _____

Number Line

Hundredth: S3

Read the number line and answer the following.



- a) Hop 8 units to the left from 10.78 on the number line. At what number will you land?

- b) Start at _____
2 units

PREVIEW

Gain complete access to the largest
collection of worksheets in all subjects!

Members, please
log in to
download this
worksheet.

Not a member?
Please sign up to
gain complete
access.

www.mathworksheets4kids.com

- c) Identify
line.

- d) How m
numbe

he left, then
nd?

5 on the number

d at 7.12 on the

- e) At what number will you land, if you move 2 units and then 4 units to the right consecutively from 4.68?

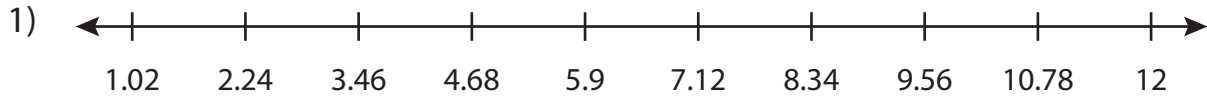
Name : _____

Answer key

Number Line

Hundredth: S3

Read the number line and answer the following.



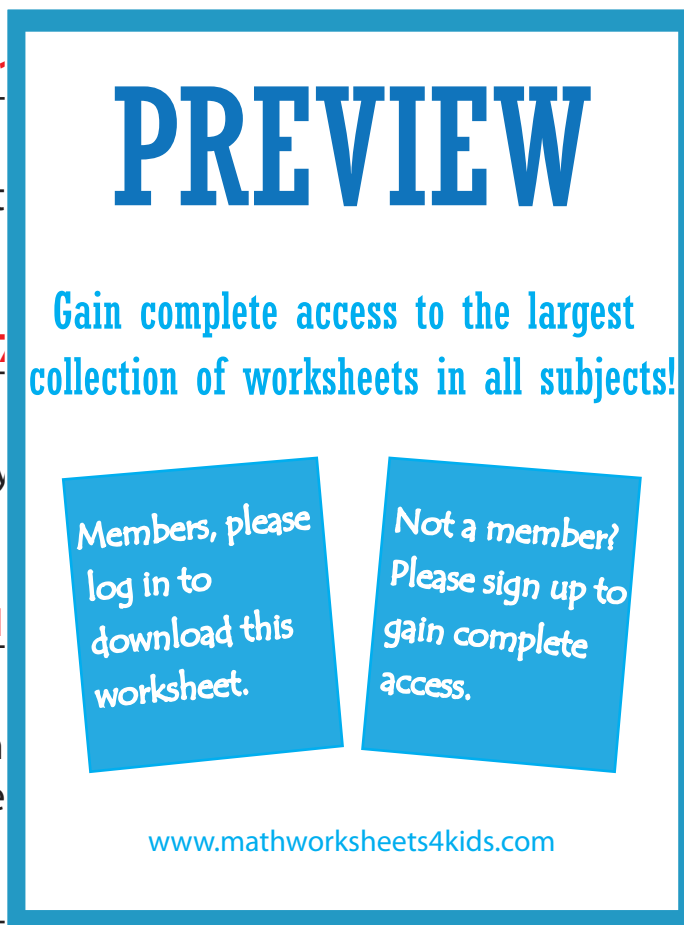
- a) Hop 8 units to the left from 10.78 on the number line. At what number will you land?

- b) Start at
2 units

- c) Identify
line.

- d) How m
numbe

- e) At what number will you land, if you move 2 units and then 4 units to the right consecutively from 4.68?



he left, then
nd?

5 on the number

d at 7.12 on the

12