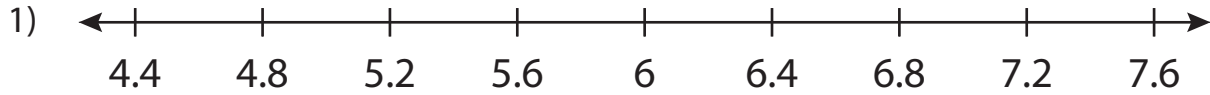


Name : _____

Number Line

Tenth: S3

Read the number line and answer the following.



- a) At what number will you land, if you move 3 units and then 2 units to the right consecutively from 4.8?

- b) If you n
will you

PREVIEW

what number

Gain complete access to the largest
collection of worksheets in all subjects!

- c) How m
numbe

at 7.6 on the

Members, please
log in to
download this
worksheet.

Not a member?
Please sign up to
gain complete
access.

- d) Start at
4 units

the left, then
nd?

www.mathworksheets4kids.com

- e) What is the increment between each number on the number line?

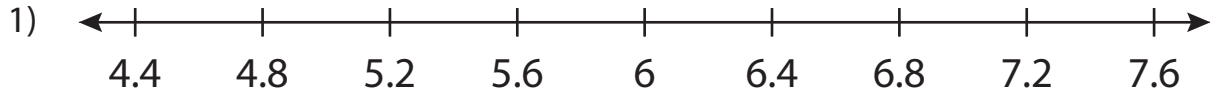
Name : _____

Answer key

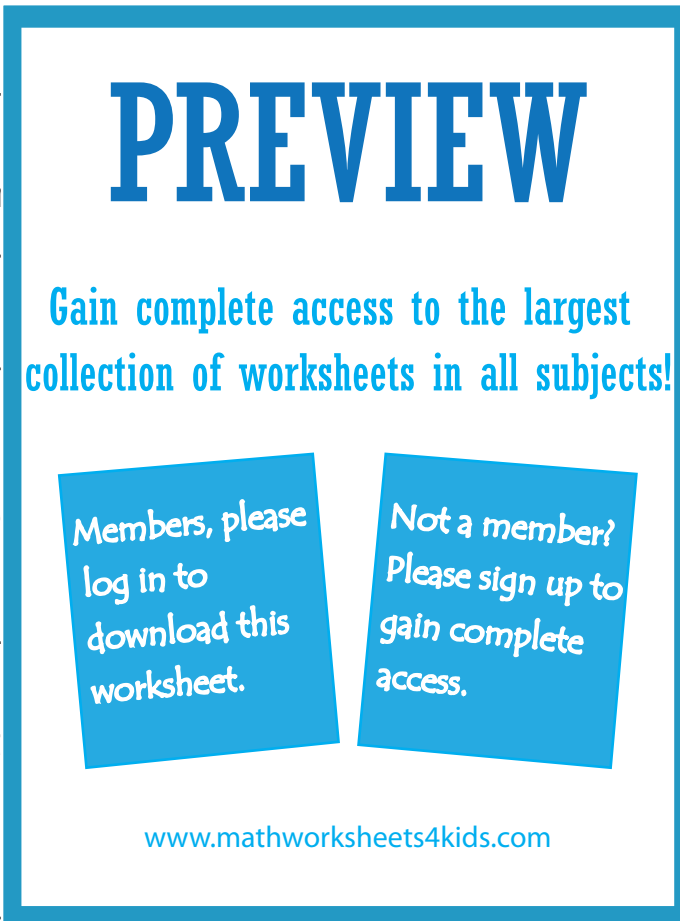
Number Line

Tenth: S3

Read the number line and answer the following.



- a) At what number will you land, if you move 3 units and then 2 units to the right consecutively from 4.8?



- b) If you n
will you

what number

- c) How m
numbe

at 7.6 on the

- d) Start at
4 units

the left, then
nd?

- e) What is the increment between each number on the number line?

0.4