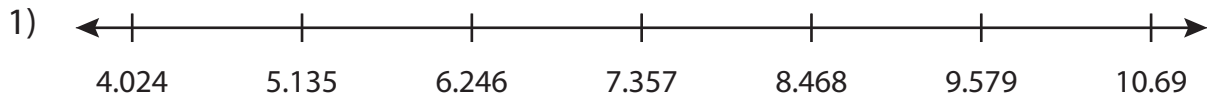


Name : _____

Number Line

Thousandth: S4

Read the number line and answer the following.



- a) Start at 7.357 on the number line. Hop 3 units to the right, then 4 units to the left. At what number will you land?

- b) How many units will you land at 9.579 on the number line?

- c) Move 2 units to the right, then move 2 units to the left.

- d) Hop 6 units to the right from 4.024 on the number line. At what number will you land?

- e) Observe the number line and identify the total number of intervals.

PREVIEW

Gain complete access to the largest collection of worksheets in all subjects!

Members, please log in to download this worksheet.

Not a member? Please sign up to gain complete access.

www.mathworksheets4kids.com

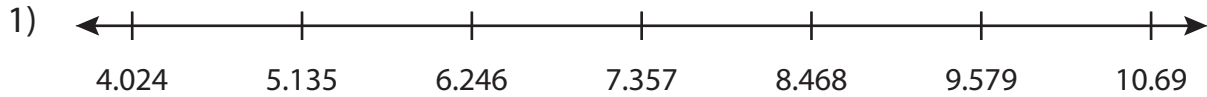
Name : _____

Answer key

Number Line

Thousandth: S4

Read the number line and answer the following.



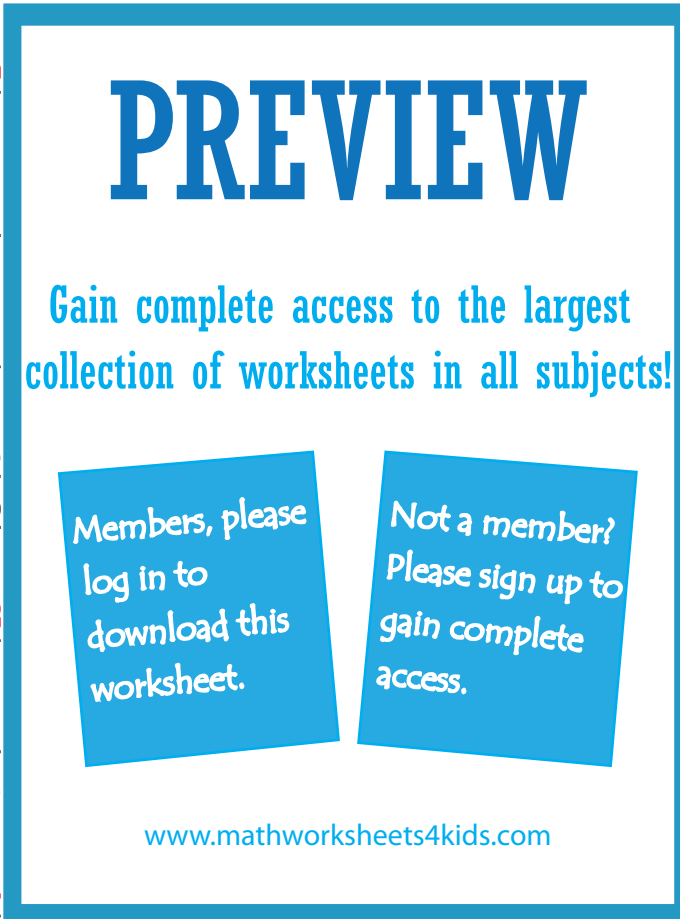
- a) Start at 7.357 on the number line. Hop 3 units to the right, then 4 units to the left. At what number will you land?

- b) How many units to the right of 9.579 on the number line?

- c) Move 2 units to the right from 8.468, then move 2 units to the left from there.

- d) Hop 6 units to the right from 4.024 on the number line. At what number will you land?

- e) Observe the number line and identify the total number of intervals.



6