

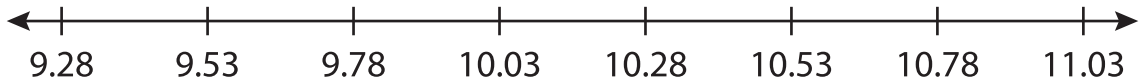
Name : _____

Number Line Subtraction

Hops-hundredth: S1

Indicate hops on each number line and complete the subtraction sentences.

1) $11.03 - 1.75 =$ _____



2) $6.13 - 0.63 =$ _____



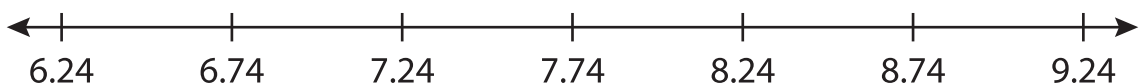
3) $10.56 - 3.56 =$ _____



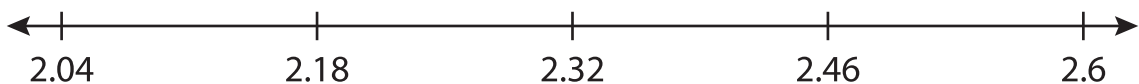
4) $3.48 - 0.34 =$ _____



5) $9.24 - 2.24 =$ _____



6) $2.6 - 0.42 =$ _____



PREVIEW

Gain complete access to the largest collection of worksheets in all subjects!

Members, please log in to download this worksheet.

Not a member? Please sign up to gain complete access.

www.mathworksheets4kids.com