

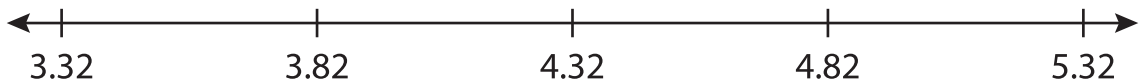
Name : _____

Number Line Subtraction

Hops-hundredth: S2

Indicate hops on each number line and complete the subtraction sentences.

1) $5.32 - 2 = \underline{\hspace{2cm}}$



2) $4.96 - 0.96 = \underline{\hspace{2cm}}$




3) $0.09 - 0.09 = \underline{\hspace{2cm}}$



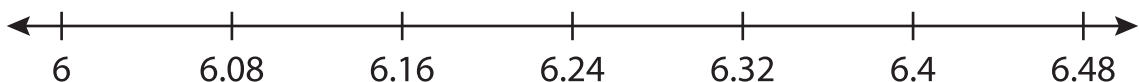
4) $8.75 - 1 = \underline{\hspace{2cm}}$



5) $12.1 - 0.1 = \underline{\hspace{2cm}}$



6) $6.32 - 0.24 = \underline{\hspace{2cm}}$



PREVIEW

Gain complete access to the largest collection of worksheets in all subjects!

Members, please log in to download this worksheet.

Not a member? Please sign up to gain complete access.

www.mathworksheets4kids.com