

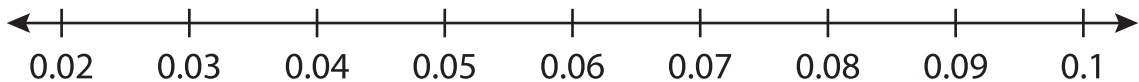
Name : _____

Number Line Subtraction

Hops-hundredth: S3

Indicate hops on each number line and complete the subtraction sentences.

1) $0.07 - 0.04 =$ _____



2) $3.34 - 0.5 =$ _____




3) $8.48 - 0.4 =$ _____




4) $9.72 - 3 =$ _____



5) $4.92 - 1.4 =$ _____



6) $12.08 - 0.02 =$ _____



PREVIEW

Gain complete access to the largest collection of worksheets in all subjects!

Members, please log in to download this worksheet.

Not a member? Please sign up to gain complete access.

www.mathworksheets4kids.com