

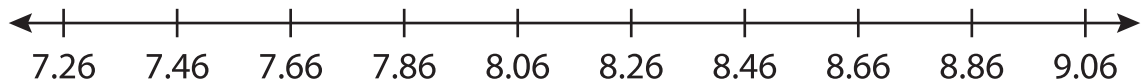
Name : _____

Number Line Subtraction

Hops-hundredth: S4

Indicate hops on each number line and complete the subtraction sentences.

1) $8.86 - 1.6 =$ _____



2) $9.16 - 0.12 =$ _____



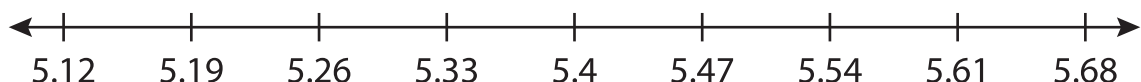
3) $15.28 - 2 =$ _____



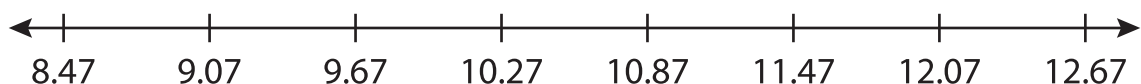
4) $4.77 - 0.2 =$ _____



5) $5.47 - 0.1 =$ _____



6) $10.27 - 0.6 =$ _____



PREVIEW

Gain complete access to the largest collection of worksheets in all subjects!

Members, please log in to download this worksheet.

Not a member? Please sign up to gain complete access.

www.mathworksheets4kids.com