

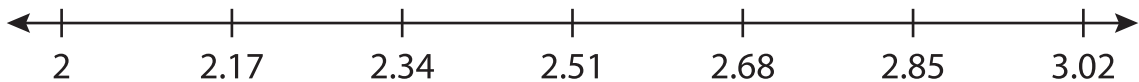
Name : _____

Number Line Subtraction

Hops-hundredth: S5

Indicate hops on each number line and complete the subtraction sentences.

1) $2.85 - 0.85 = \underline{\hspace{2cm}}$



2) $8.94 - 0.8 = \underline{\hspace{2cm}}$




3) $2.77 - 1 = \underline{\hspace{2cm}}$



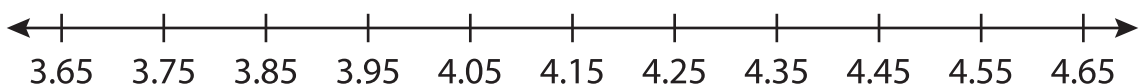
4) $0.24 - 0.03 = \underline{\hspace{2cm}}$



5) $13.02 - 0.68 = \underline{\hspace{2cm}}$



6) $4.65 - 1 = \underline{\hspace{2cm}}$



PREVIEW

Gain complete access to the largest collection of worksheets in all subjects!

Members, please log in to download this worksheet.

Not a member? Please sign up to gain complete access.

www.mathworksheets4kids.com