

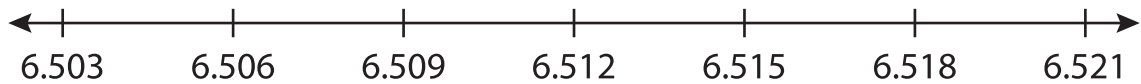
Name : _____

Number Line Subtraction

Hops: S1

Indicate hops on each number line and complete the subtraction sentences.

1) $6.521 - 0.009 =$ _____



2) $9.95 - 0.1 =$ _____



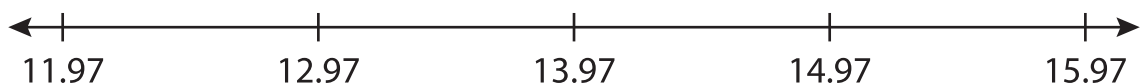
3) $0.8 - 0.1 =$ _____



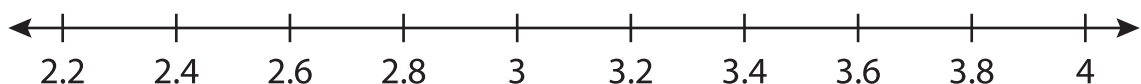
4) $2.2 - 0.5 =$ _____



5) $15.97 - 1.0 =$ _____



6) $4 - 1.4 =$ _____



PREVIEW

Gain complete access to the largest collection of worksheets in all subjects!

Members, please log in to download this worksheet.

Not a member? Please sign up to gain complete access.

www.mathworksheets4kids.com