


Name : \_\_\_\_\_

# Number Line Subtraction

Hops: 52

Indicate hops on each number line and complete the subtraction sentences.

1)  $6.1 - 0.16 =$  \_\_\_\_\_



2)  $7.917 - 1 =$  \_\_\_\_\_




3)  $8.908 - 0 =$  \_\_\_\_\_



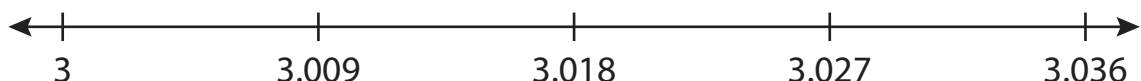
4)  $14.25 -$  \_\_\_\_\_



5)  $4.45 -$  \_\_\_\_\_



6)  $3.036 - 0.027 =$  \_\_\_\_\_



**PREVIEW**

Gain complete access to the largest collection of worksheets in all subjects!

Members, please log in to download this worksheet.

Not a member? Please sign up to gain complete access.

[www.mathworksheets4kids.com](http://www.mathworksheets4kids.com)

Name : \_\_\_\_\_

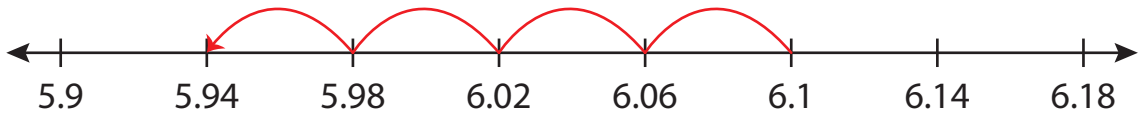
## Answer key

# Number Line Subtraction

Hops: 52

Indicate hops on each number line and complete the subtraction sentences.

1)  $6.1 - 0.16 = \underline{5.94}$



2)  $7.917 - 1 = \underline{6.917}$



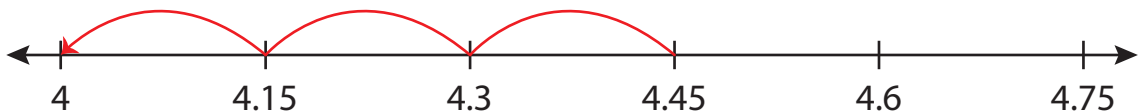
3)  $8.908 - 0 = \underline{8.908}$



4)  $14.25 - 0.5 = \underline{13.75}$



5)  $4.45 - 0.15 = \underline{4.3}$



6)  $3.036 - 0.027 = \underline{3.009}$



**PREVIEW**

Gain complete access to the largest collection of worksheets in all subjects!

Members, please log in to download this worksheet.

Not a member? Please sign up to gain complete access.

[www.mathworksheets4kids.com](http://www.mathworksheets4kids.com)