

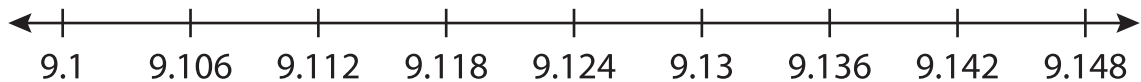
Name : \_\_\_\_\_

# Number Line Subtraction

Hops: S3

Indicate hops on each number line and complete the subtraction sentences.

1)  $9.142 - 0.03 =$  \_\_\_\_\_



2)  $8.8 - 0.8 =$  \_\_\_\_\_



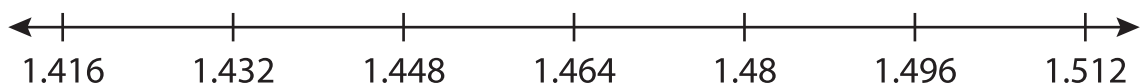
3)  $6 - 0.25 =$  \_\_\_\_\_



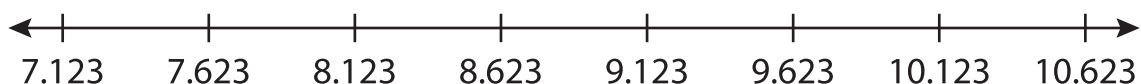
4)  $0.09 - 0.01 =$  \_\_\_\_\_



5)  $1.48 - 0.02 =$  \_\_\_\_\_



6)  $10.623 - 2.5 =$  \_\_\_\_\_



**PREVIEW**

Gain complete access to the largest collection of worksheets in all subjects!

Members, please log in to download this worksheet.

Not a member? Please sign up to gain complete access.

[www.mathworksheets4kids.com](http://www.mathworksheets4kids.com)