

Name : _____

Number Line Subtraction

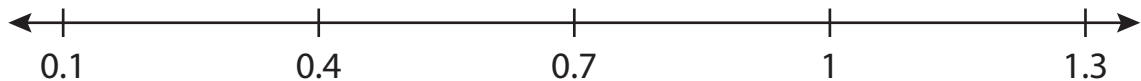
Hops-tenth: S1

Indicate hops on each number line and complete the subtraction sentences.

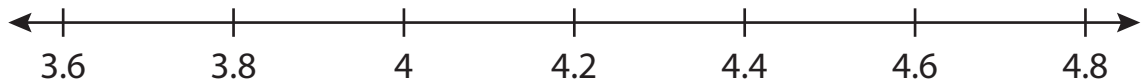
1) $3.1 - 2.5 =$ _____




2) $0.7 - 0.3 =$ _____



3) $4.8 - 1.2 =$ _____



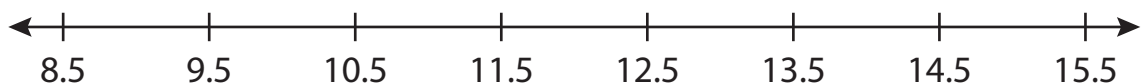
4) $2.4 - 0.7 =$ _____



5) $9.5 - 0.5 =$ _____



6) $14.5 - 4 =$ _____



Name: _____

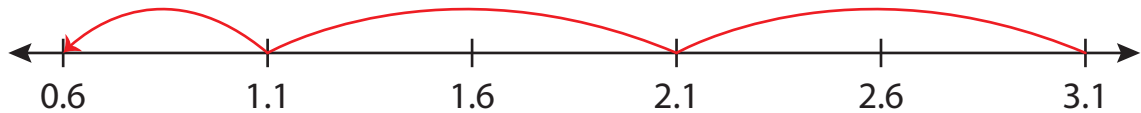
Answer key

Number Line Subtraction

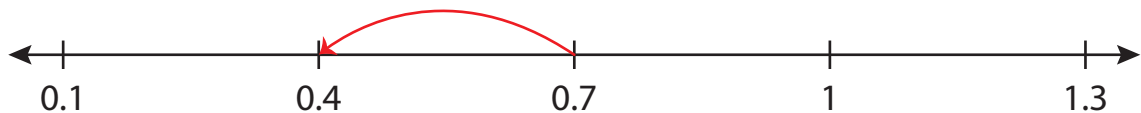
Hops-tenth: S1

Indicate hops on each number line and complete the subtraction sentences.

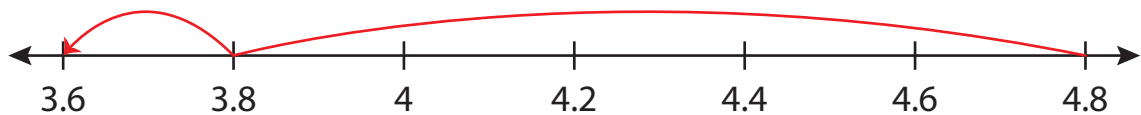
1) $3.1 - 2.5 = \underline{0.6}$




2) $0.7 - 0.3 = \underline{0.4}$



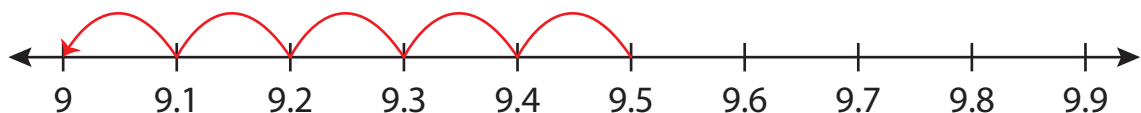
3) $4.8 - 1.2 = \underline{3.6}$



4) $2.4 - 0.7 = \underline{1.7}$



5) $9.5 - 0.5 = \underline{9}$



6) $14.5 - 4 = \underline{10.5}$

