


Name : \_\_\_\_\_

# Number Line Subtraction

Hops-tenth: S2

Indicate hops on each number line and complete the subtraction sentences.

1)  $11.7 - 0.9 = \underline{\hspace{2cm}}$



2)  $7.9 - 2 = \underline{\hspace{2cm}}$




3)  $3.2 - 0.6 = \underline{\hspace{2cm}}$



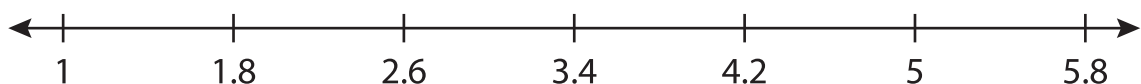
4)  $4.9 - 1.4 = \underline{\hspace{2cm}}$



5)  $9.7 - 3 = \underline{\hspace{2cm}}$



6)  $5 - 0.8 = \underline{\hspace{2cm}}$



**PREVIEW**

Gain complete access to the largest collection of worksheets in all subjects!

Members, please log in to download this worksheet.

Not a member? Please sign up to gain complete access.

[www.mathworksheets4kids.com](http://www.mathworksheets4kids.com)