

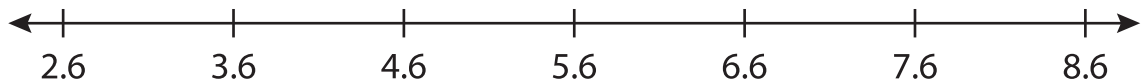
Name : _____

Number Line Subtraction

Hops-tenth: S3

Indicate hops on each number line and complete the subtraction sentences.

1) $8.6 - 5 = \underline{\hspace{2cm}}$



2) $2.8 - 0.7 = \underline{\hspace{2cm}}$



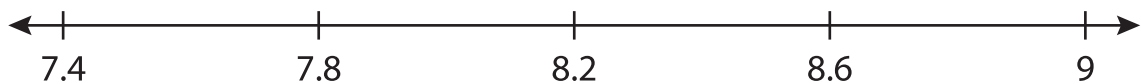
3) $10.5 - 3.5 = \underline{\hspace{2cm}}$



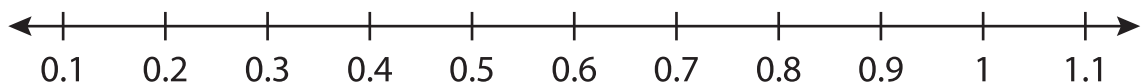
4) $9.6 - 0.6 = \underline{\hspace{2cm}}$



5) $8.2 - 0.8 = \underline{\hspace{2cm}}$



6) $0.9 - 0.3 = \underline{\hspace{2cm}}$



PREVIEW

Gain complete access to the largest collection of worksheets in all subjects!

Members, please log in to download this worksheet.

Not a member? Please sign up to gain complete access.

www.mathworksheets4kids.com