

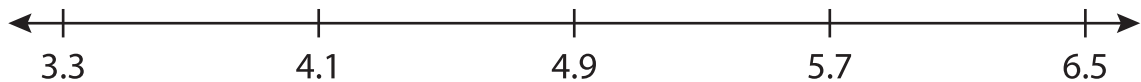
Name : \_\_\_\_\_

# Number Line Subtraction

Hops-tenth: S4

Indicate hops on each number line and complete the subtraction sentences.

1)  $4.1 - 0.8 =$  \_\_\_\_\_



2)  $6.8 - 1.6 =$  \_\_\_\_\_




3)  $9.2 - 0.6 =$  \_\_\_\_\_



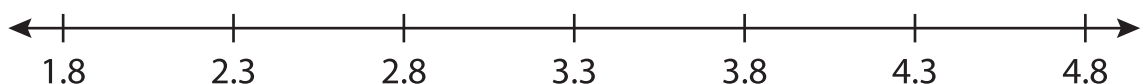
4)  $5.7 - 1 =$  \_\_\_\_\_



5)  $11.2 - 0.9 =$  \_\_\_\_\_



6)  $4.3 - 2 =$  \_\_\_\_\_



**PREVIEW**

Gain complete access to the largest collection of worksheets in all subjects!

Members, please log in to download this worksheet.

Not a member? Please sign up to gain complete access.

[www.mathworksheets4kids.com](http://www.mathworksheets4kids.com)