

Name : _____

Number Line Subtraction

Hops-tenth: S5

Indicate hops on each number line and complete the subtraction sentences.

1) $8.2 - 1.4 =$ _____



2) $11.8 - 0.2 =$ _____



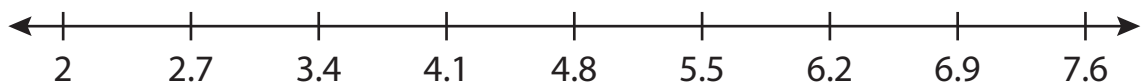
3) $14.4 - 0.9 =$ _____



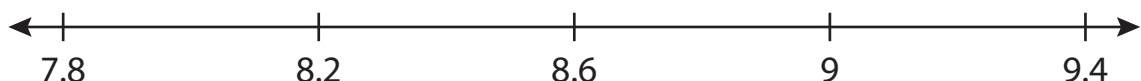
4) $6.4 - 5 =$ _____



5) $2.7 - 0.7 =$ _____



6) $9 - 0.8 =$ _____



PREVIEW

Gain complete access to the largest collection of worksheets in all subjects!

Members, please log in to download this worksheet.

Not a member? Please sign up to gain complete access.

www.mathworksheets4kids.com

Name : _____

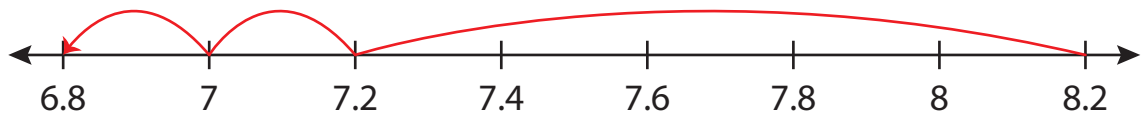
Answer key

Number Line Subtraction

Hops-tenth: S5

Indicate hops on each number line and complete the subtraction sentences.

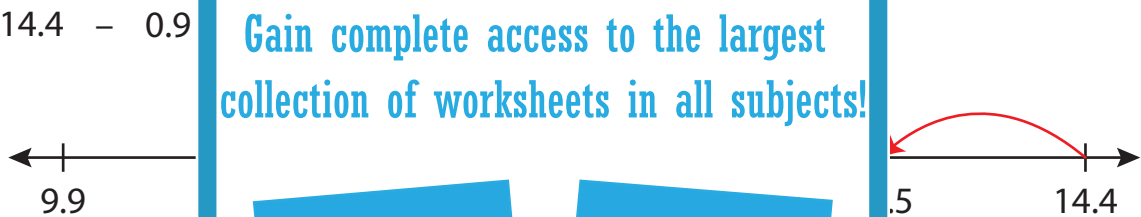
1) $8.2 - 1.4 = \underline{6.8}$



2) $11.8 - 0.2 = \underline{11.6}$



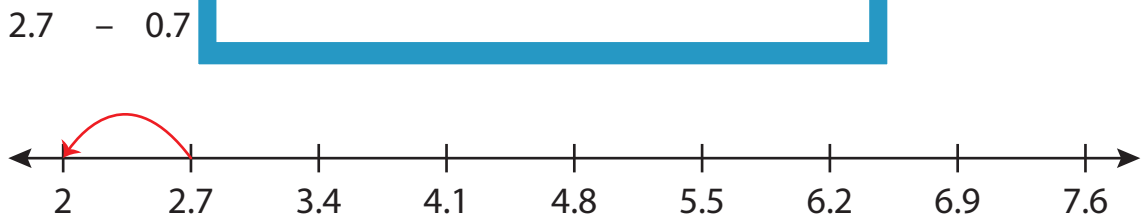
3) $14.4 - 0.9 = \underline{13.5}$



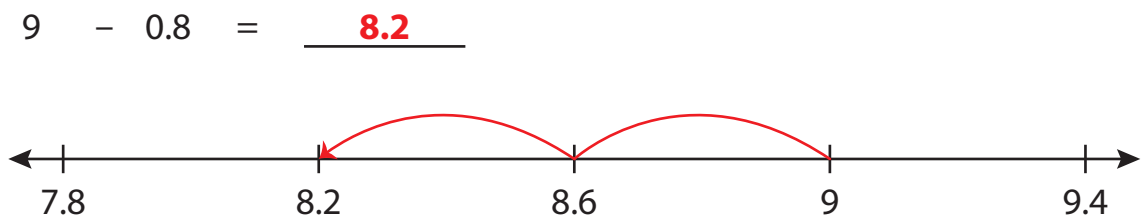
4) $6.4 - 0.8 = \underline{5.6}$



5) $2.7 - 0.7 = \underline{2.0}$



6) $9 - 0.8 = \underline{8.2}$



PREVIEW

Gain complete access to the largest collection of worksheets in all subjects!

Members, please log in to download this worksheet.

Not a member? Please sign up to gain complete access.

www.mathworksheets4kids.com