

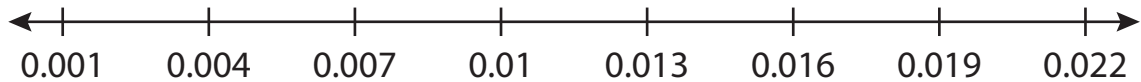
Name : _____

Number Line Subtraction

Hops-thousandth: S1

Indicate hops on each number line and complete the subtraction sentences.

1) $0.007 - 0.006 =$ _____



2) $9.432 - 2.25 =$ _____




3) $3.464 - 0.496 =$ _____



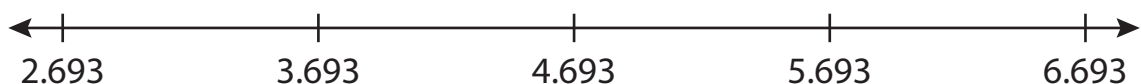
4) $1.468 - 0.27 =$ _____



5) $11.686 - 0.686 =$ _____



6) $6.693 - 4 =$ _____



PREVIEW

Gain complete access to the largest collection of worksheets in all subjects!

Members, please log in to download this worksheet.

Not a member? Please sign up to gain complete access.

www.mathworksheets4kids.com

Name : _____

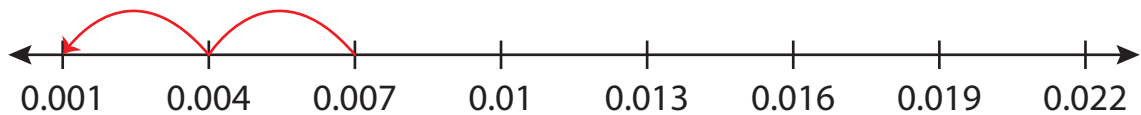
Answer key

Number Line Subtraction

Hops-thousandth: S1

Indicate hops on each number line and complete the subtraction sentences.

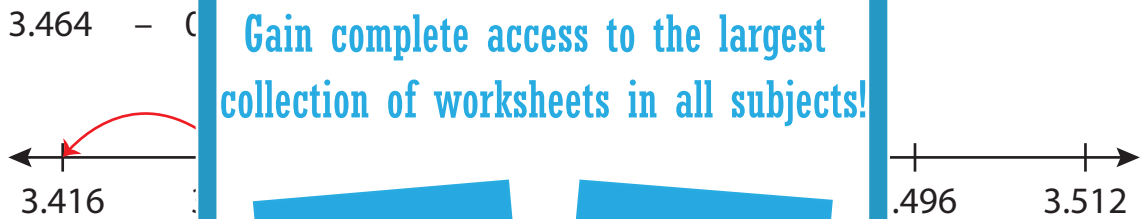
1) $0.007 - 0.006 = \underline{0.001}$



2) $9.432 - 2.25 = \underline{7.182}$



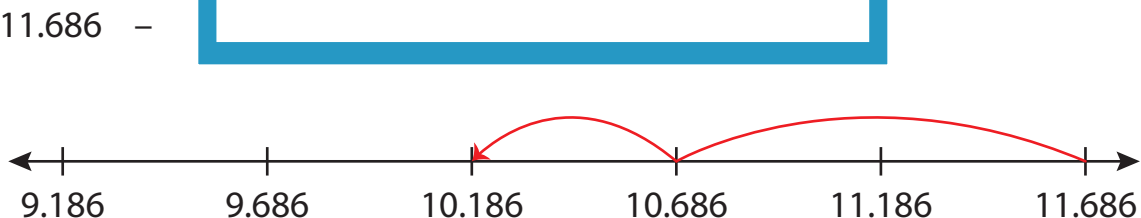
3) $3.464 - 0.048 = \underline{3.416}$



4) $1.468 - 0.218 = \underline{1.250}$



5) $11.686 - 0.500 = \underline{11.186}$



6) $6.693 - 4 = \underline{2.693}$

