

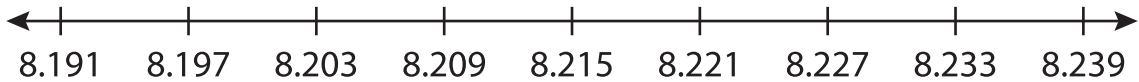
Name : _____

Number Line Subtraction

Hops-thousandth: S2

Indicate hops on each number line and complete the subtraction sentences.

1) $8.233 - 0.036 = \underline{\hspace{2cm}}$



2) $11.345 - 2 = \underline{\hspace{2cm}}$



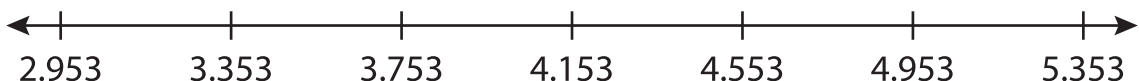
3) $7.67 - 0 = \underline{\hspace{2cm}}$



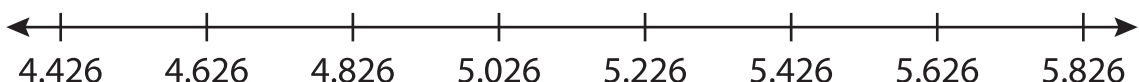
4) $6.006 - 0 = \underline{\hspace{2cm}}$



5) $4.153 - \underline{\hspace{1cm}} = \underline{\hspace{2cm}}$



6) $5.626 - 1.2 = \underline{\hspace{2cm}}$



PREVIEW

Gain complete access to the largest collection of worksheets in all subjects!

Members, please log in to download this worksheet.

Not a member? Please sign up to gain complete access.

www.mathworksheets4kids.com