

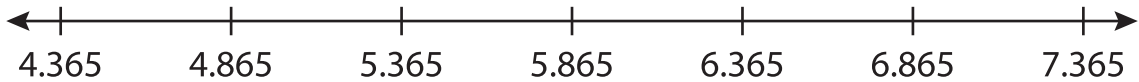
Name : \_\_\_\_\_

# Number Line Subtraction

Hops-thousandth: S3

Indicate hops on each number line and complete the subtraction sentences.

1)  $7.365 - 3 = \underline{\hspace{2cm}}$



2)  $5.244 - 0.022 = \underline{\hspace{2cm}}$



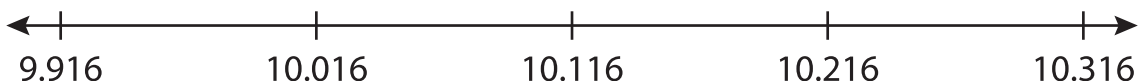
3)  $3.176 - 1.4 = \underline{\hspace{2cm}}$



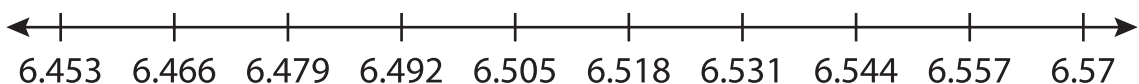
4)  $8.048 - 0.008 = \underline{\hspace{2cm}}$



5)  $10.216 - 0.1 = \underline{\hspace{2cm}}$



6)  $6.557 - 0.065 = \underline{\hspace{2cm}}$



**PREVIEW**

Gain complete access to the largest collection of worksheets in all subjects!

Members, please log in to download this worksheet.

Not a member? Please sign up to gain complete access.

[www.mathworksheets4kids.com](http://www.mathworksheets4kids.com)